
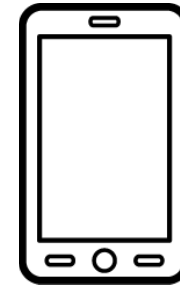
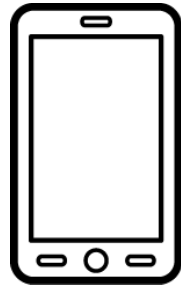


Read and Do

Name: _____

Read each sentence. Do what each sentence says.



1. Color the second phone blue.



2. Draw green grass below the first hospital.



3. Draw a purple oval around the third phone.



4. Draw a red square around the second hospital.



5. Color the first phone orange.



6. Color the last hospital gray.

Practice drawing here.

Look, Read and Think

Name: _____


Place an "X" in the box next to the sentence that describes the picture.



Four people are in front of a home.

Six people are in front of a home.

Two people are in front of a home.



Two people are in front of a home.

Four people are in front of a home.

Six people are in front of a home.



Six people are in front of a home.

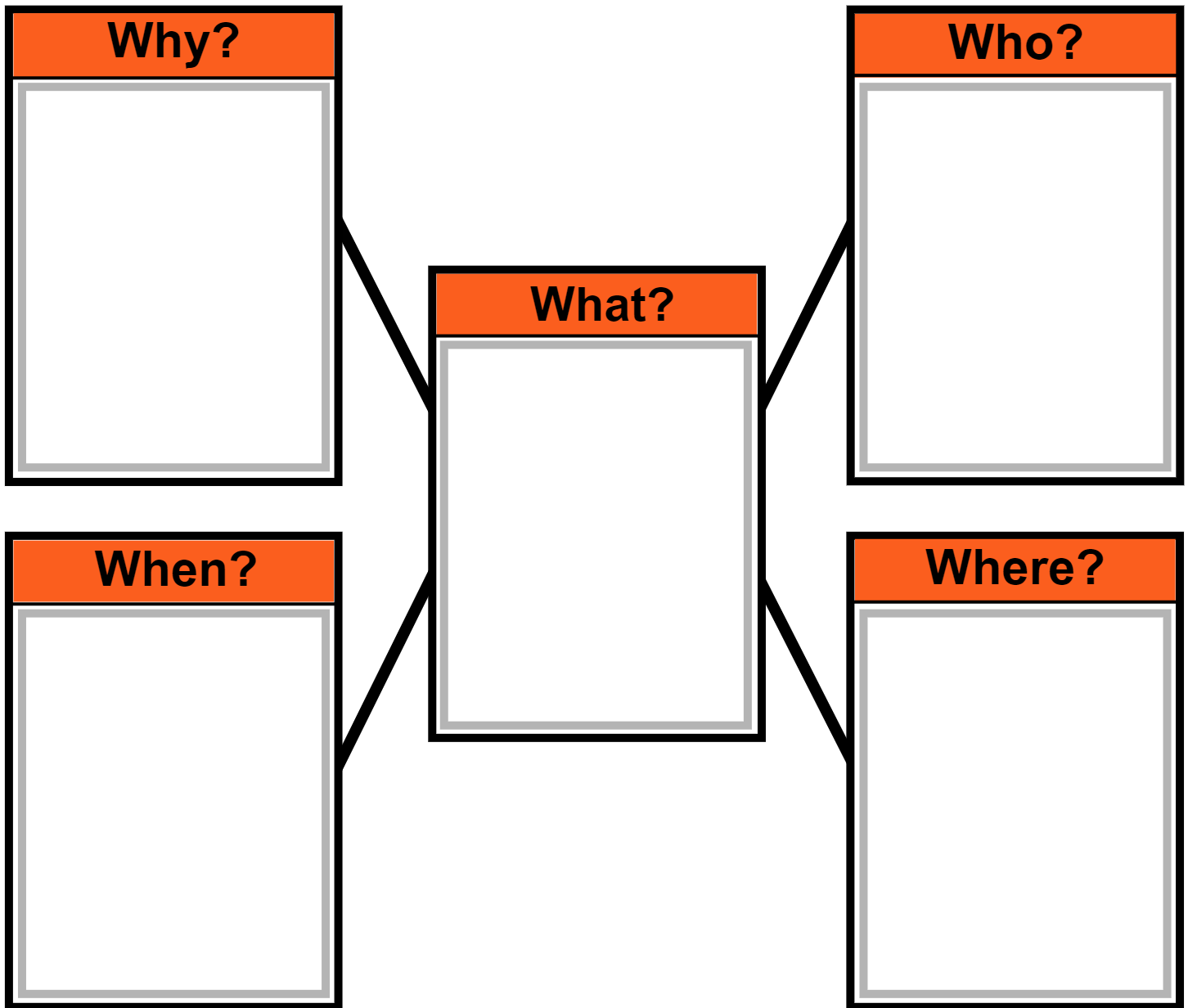
Two people are in front of a home.


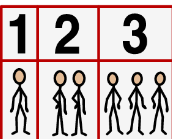

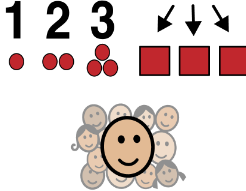
Four people are in front of a home.

Webbing

Name: _____

Choose a picture/word card to fill in each part of the web.



<p>2020</p> <p>2020</p>	<p>Census Bureau</p>  <p>1 2 3</p>	<p>2020 Census</p> <p>2020</p>  <p>1 2 3</p>	<p>U.S.</p> 	<p>count every person</p>  <p>1 2 3</p>
--------------------------------	---	--	--	--

Punctuation

Name: _____

A period (.) comes at the end of a statement or telling sentence. (I like to run.)

A question mark (?) comes at the end of a question or asking sentence. (Do you run?)

An exclamation point (!) comes at the end of a sentence to show strong feelings or emotion. (He can run fast!)

Choose the correct punctuation mark at the end of each sentence.

1. What does a census count

2. A U.S. government group does the census

3. What is the information about

4. How does the Census Bureau do a census

5. Each form has a list of questions

6. Who may visit some homes

Capitalization

Name: _____

The first word in a sentence begins with a capital letter. Proper nouns are also capitalized. Proper nouns name a specific noun such as a person's name, a city, an ocean, state or country.



Circle the capital letters.

1. This group is called the Census Bureau.
 2. The Census Bureau sends census forms in March.
 3. The census is part of U.S. law.
-



Underline the letters that should be capitalized.

4. the census will count every person living in the u.s.
5. the census bureau is a u.s. government group.
6. the census bureau is in suitland, maryland.

Capitalization and Punctuation

Name: _____

1. Circle all the capitalization and punctuation errors in each sentence.
2. Write the corrected sentence below each sentence.

1. The U.S. has a census every 10 Years.

(1 error)

2. The U.S. Government uses the information

(2 errors)

3. some Decisions are about Money.

(3 errors)

4. Each Form has A list of Questions.

(3 errors)

5. the Workers count people living in the Homes

(4 errors)

Which Comes Next?

Name: _____

1. Look at each symbol pattern.
2. Circle the symbol that comes next.

Word Problems

Name: _____


Fill in the blanks. Solve each word problem.

On Monday a worker visited _____ homes.



Show your work.

On Tuesday the worker visited _____ homes.

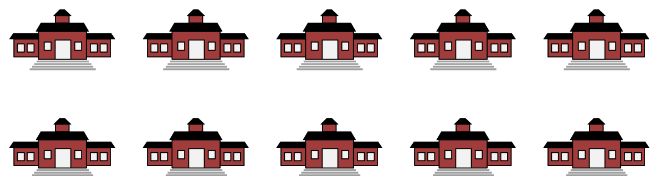


+

How many homes did the worker visit altogether?

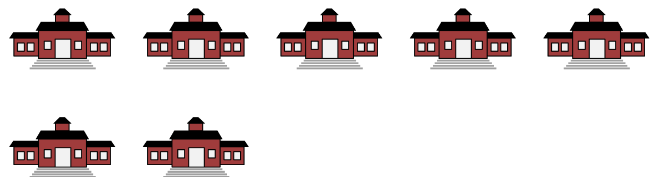
Answer

In 2018 a state built _____ schools.



Show your work.

In 2017 the state built _____ schools.



-

How many more schools did the state build in 2018 than in 2017?


Answer

Time to the Hour

Name: _____

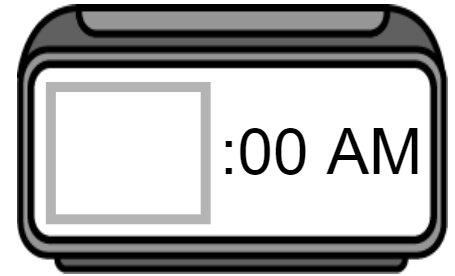
Read the question. Find the answer. Place the time on the clock.

This morning workers started fixing a road near my home. What time did the workers start fixing the road?




8:00

11:00

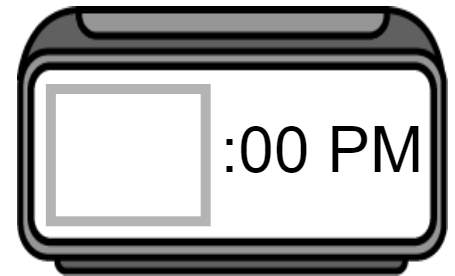


This afternoon in social studies class, my brother learned about different government groups. What time did class start?




3:00

1:00



This morning my mom watched a video about the census. What time did she start watching the video?




10:00

9:00



This afternoon leaders in my state had a meeting to talk about building a new hospital. What time did the meeting start?




3:00

4:00

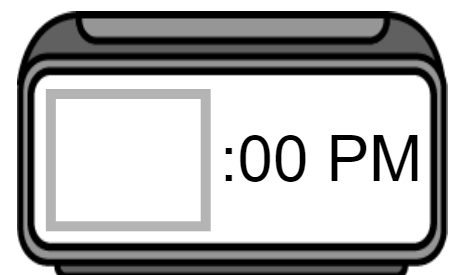


This evening my neighbor answered questions on a census form. What time did my neighbor start answering the questions?



7:00

6:00

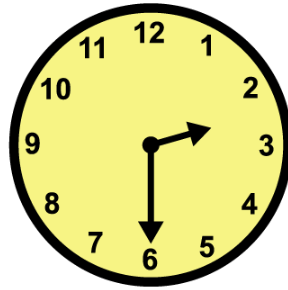


Time to the Half Hour

Name: _____

Read the question. Find the answer. Place the time on the clock.

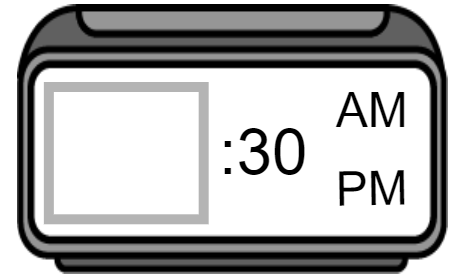
This afternoon a nurse went to work at a hospital. What time did the nurse arrive at the hospital?




6:30

4:30

2:30



This morning my uncle went to work at the Census Bureau. What time did he arrive at the Census Bureau?




5:30

7:30

10:30



This afternoon a family bought a new home. What time did the family buy the new home?




5:30

3:30

2:30



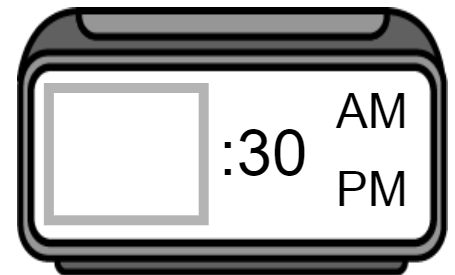
This afternoon in social studies class, I learned about the history of the census. What time did social studies class start?




2:30

1:30

12:30



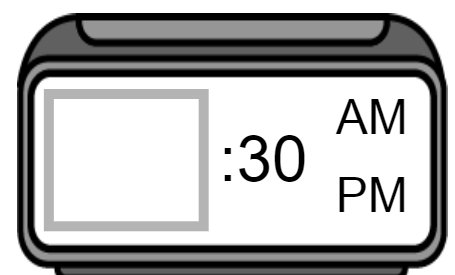
This morning workers started building a new school. What time did the workers start building the new school?



12:30

11:30

10:30




Time to the Quarter Hour

Name: _____

Read the question. Find the answer. Place the time on the clock.

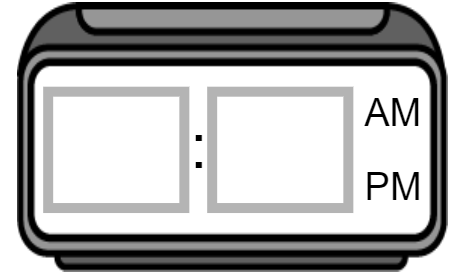
This afternoon a Census Bureau worker visited homes to ask questions. What time did the worker stop visiting homes?




5:15

3:15

1:45



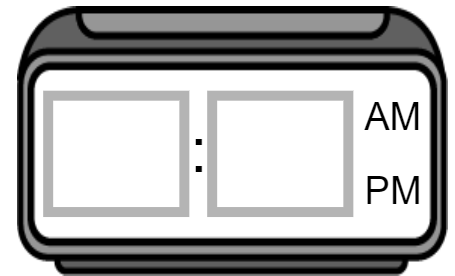
This afternoon my teacher talked about the census to my class. What time did my teacher start talking about the census?




11:45

1:45

3:15



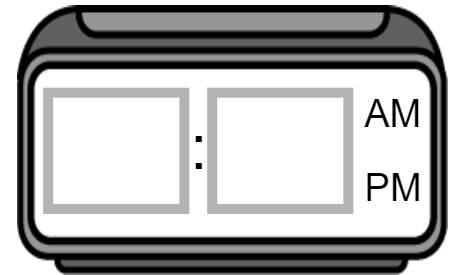
This afternoon government leaders had a meeting about building a new road. What time did the meeting start?




2:15

1:15

12:15



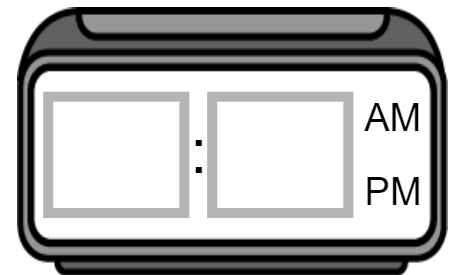
This morning a teacher went to work at a school. What time did the teacher arrive at the school?



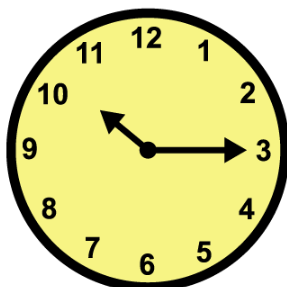
6:15

6:45

7:45



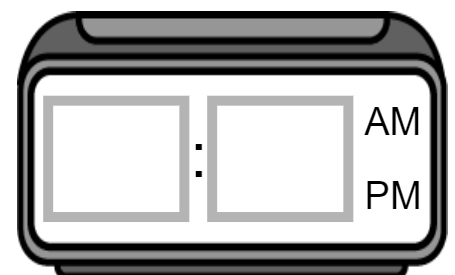
This morning my parents answered questions on a census form. What time did they start answering the questions?



10:15

9:15

3:15

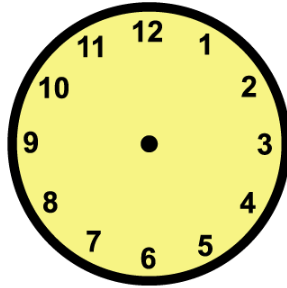


Time Lapse

Name: _____

Read the question. Find the answer. Place the time on the clock.

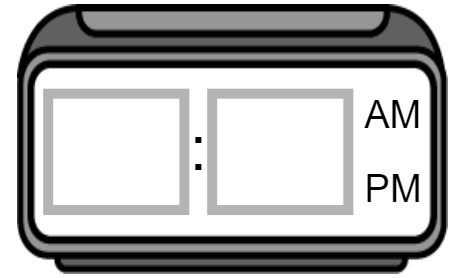
This afternoon in social studies class, I learned about the census. Class started at 1:00 and lasted 1 hour. What time did class end?



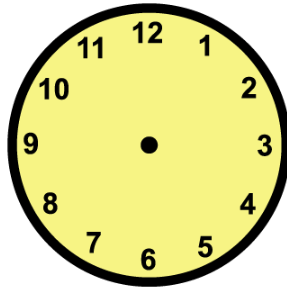
4:00

2:00

12:00



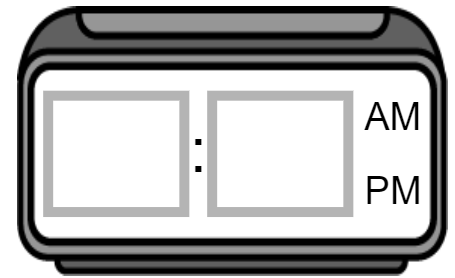
This morning my mom and I cleaned our home. We started cleaning at 9:00 and cleaned for 2 hours and 30 minutes. What time did we stop cleaning?



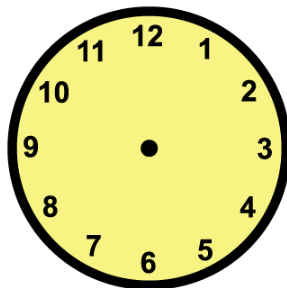
11:30

10:00

9:00



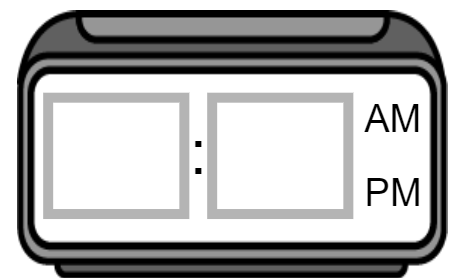
This afternoon Census Bureau workers visited homes. They started visiting at 1:30 and visited for 3 hours and 30 minutes. What time did they stop visiting?



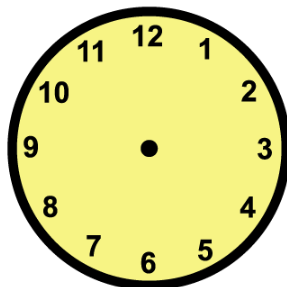
4:00

6:00

5:00



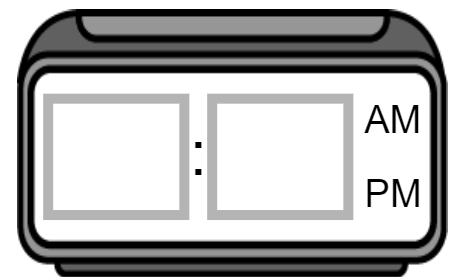
This morning my neighbor went to work at a hospital. He started working at 4:15 and worked for 7 hours and 45 minutes. What time did he stop working?



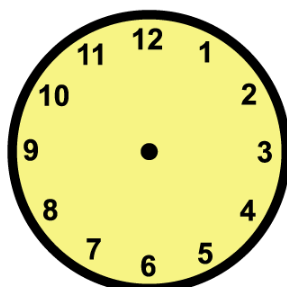
12:00

12:30

11:00



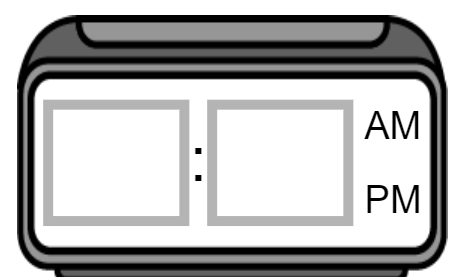
This morning a janitor cleaned a school. The janitor started cleaning at 5:30 and cleaned for 1 hour and 45 minutes. What time did the janitor stop cleaning?



6:15

7:15


















6:45

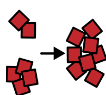


Graphing

Name: _____


- Count the number of symbols in each row. Place that number in the last column.
- Answer the questions about the graph.

form									
question									
hospital									
road									
phone									
	1	2	3	4	5	6	7	8	total



1. Which word has the most symbols?

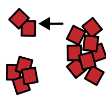
phone



form



hospital

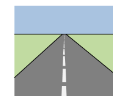


2. Which word has the fewest symbols?

hospital



road



question



3. What is the highest number?

7

2

5




4. What is the lowest number?

2

5

1



5. Do any words have the same number?

yes



no



Geography

Name: _____

Use the map to answer the questions.

U.S. 



What place is this page about?


Cuba



Australia



U.S.



north



west



east



What direction would you travel to go from Mexico to Canada?

Caspian Sea



Atlantic Ocean



Thames River



What body of water is Washington, D.C., near?