
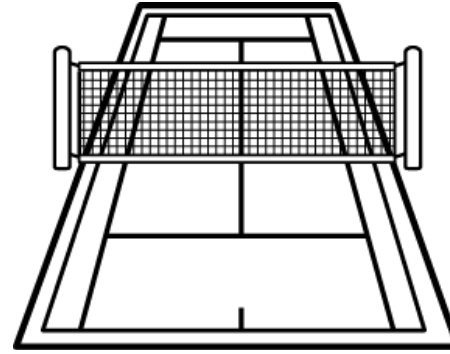
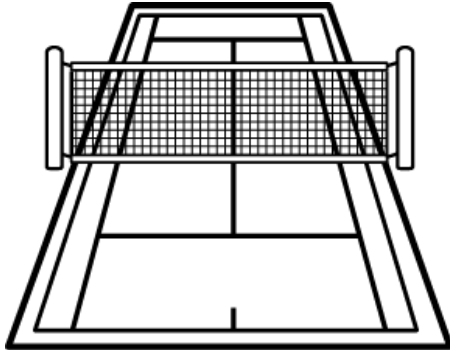


Read and Do

Name: _____

Read each sentence. Do what each sentence says.



1. Draw a yellow sun above the last tennis court.



2. Draw a blue oval around the third tennis player.



3. Color the first tennis court red.



4. Draw a purple diamond around the second tennis player.



5. Color the second tennis court green.




6. Draw an orange rectangle around the first tennis player.

Practice drawing here.

Look, Read and Think

Name: _____


Place an "X" in the box next to the sentence that describes the picture.



Two tennis players stand in front of a net.

The tennis player hits a tennis ball.


One tennis player stands in front of a net.



The tennis player hits a tennis ball.

One tennis player stands in front of a net.

Two tennis players stand in front of a net.



One tennis player stands in front of a net.

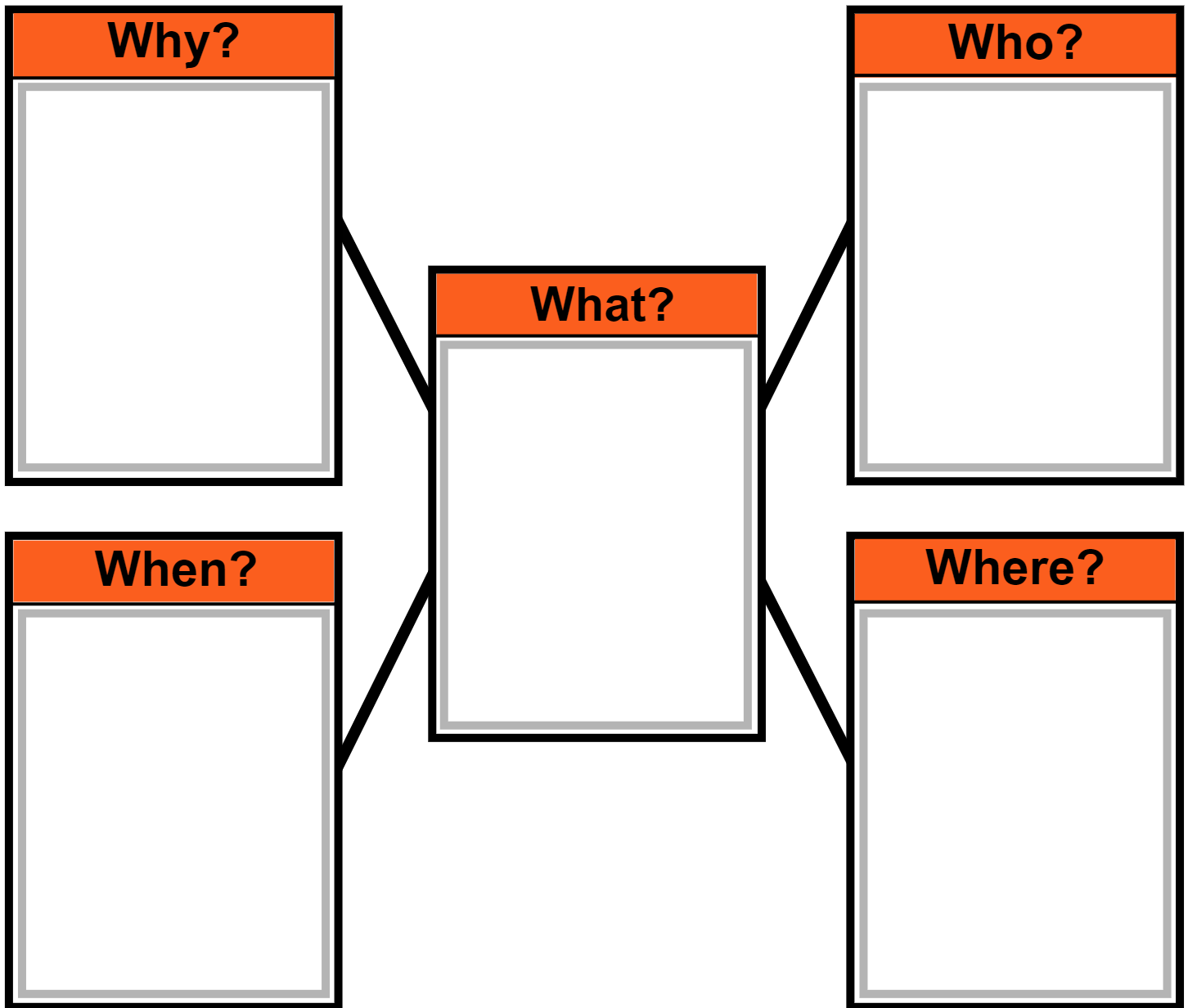
Two tennis players stand in front of a net.

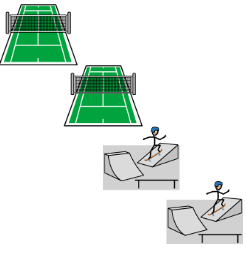




The tennis player hits a tennis ball.

Webbing

Name: _____

Choose a picture/word card to fill in each part of the web.



<p>tennis courts, skateparks</p> 	<p>Amazing Young Athletes</p> 	<p>made records</p> 	<p>now</p> 	<p>Coco Gauff, Tom Schaar</p> 
--	---	---	---	---

Punctuation

Name: _____

A period (.) comes at the end of a statement or telling sentence. (I like to run.)

A question mark (?) comes at the end of a question or asking sentence. (Do you run?)

An exclamation point (!) comes at the end of a sentence to show strong feelings or emotion. (He can run fast!)

Choose the correct punctuation mark at the end of each sentence.

1. Coco Gauff is a professional tennis player

2. How old is Coco Gauff now

3. Coco is an amazing young tennis player

4. Where does Tom Schaar compete

5. Tom started competing at five years old

6. What team is Tom on

Capitalization

Name: _____

The first word in a sentence begins with a capital letter. Proper nouns are also capitalized. Proper nouns name a specific noun such as a person's name, a city, an ocean, state or country.



Circle the capital letters.

1. The U.S. has many young athletes.
 2. Another amazing young athlete is Tom Schaar.
 3. Tom is on the U.S. Skateboarding National Team.
-



Underline the letters that should be capitalized.

4. coco gauff lives in delray beach, florida.
5. coco's real name is cori gauff.
6. tom schaar lives in malibu, california.

Capitalization and Punctuation

Name: _____

1. Circle all the capitalization and punctuation errors in each sentence.
2. Write the corrected sentence below each sentence.

1. Coco started playing Tennis at seven years Old.

(2 errors)

2. now Coco is Almost 16 years old.

(2 errors)

3. Coco beat some of the best Tennis Players

(3 errors)

4. Tom made Records doing Skateboard Tricks.

(3 errors)

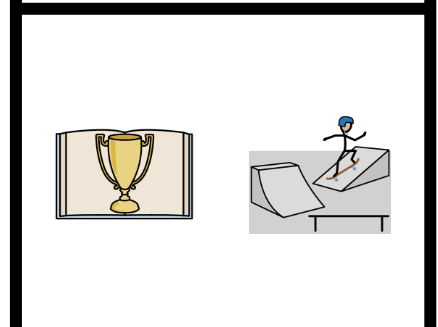
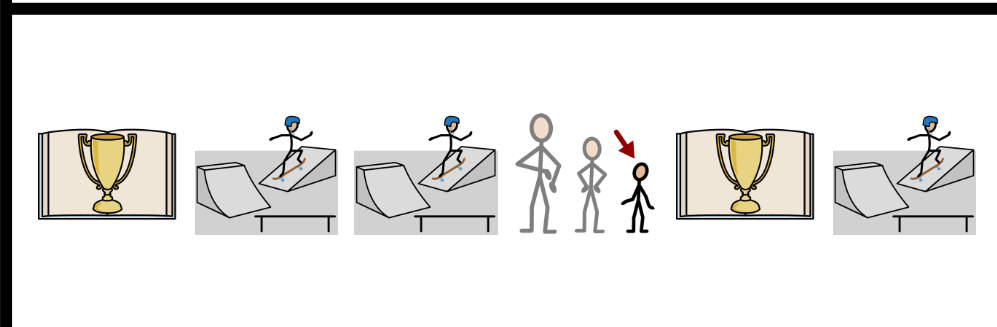
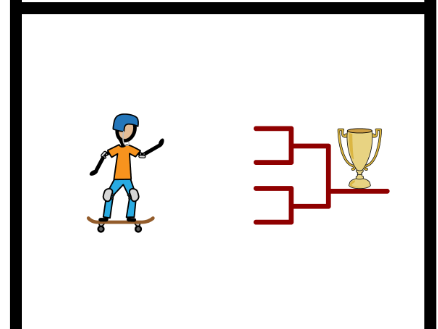
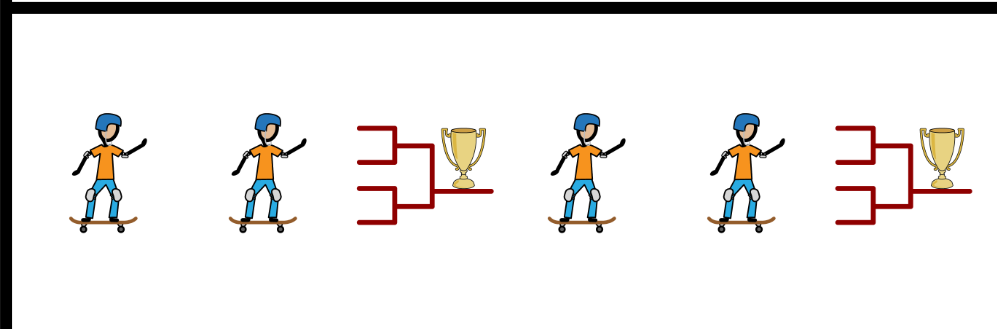

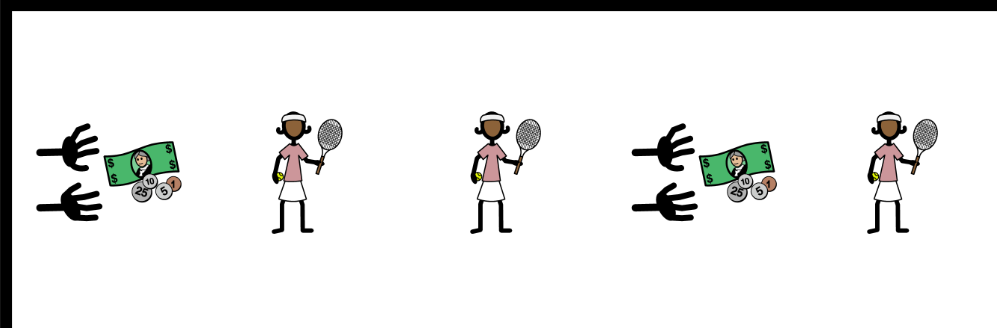




5. What Amazing Athletes do You like to watch.

(4 errors)

Which Comes Next?

Name: _____

1. Look at each symbol pattern.
2. Circle the symbol that comes next.



Word Problems

Name: _____

Fill in the blanks. Solve each word problem.

One day _____ tennis players played in a tournament.



Show your work.

Another day _____ tennis players played in a tournament.



+

How many tennis players altogether played in a tournament?


Answer

On Monday a skateboarder did _____ spins.



Show your work.

On Tuesday the skateboarder did _____ spins.



-

How many more spins did the skateboarder do on Monday than on Tuesday?


Answer

Time to the Hour

Name: _____

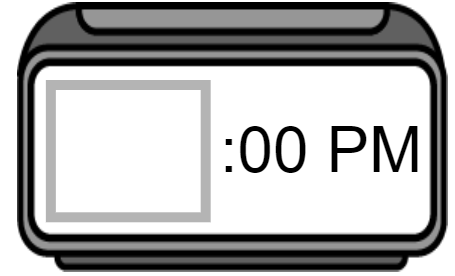
Read the question. Find the answer. Place the time on the clock.

This afternoon a skateboarder practiced doing a new trick. What time did the skateboarder start practicing?




7:00

4:00

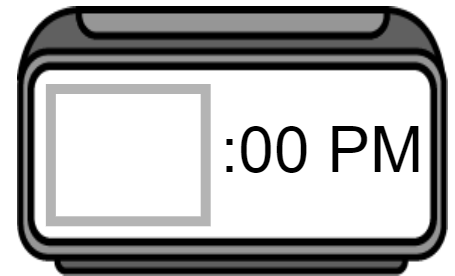


This afternoon in gym class, my sister played tennis. What time did gym class start?




1:00

3:00



This morning a city announced plans for a new skatepark. What time did the city announce the plans?




10:00

8:00



This afternoon an athlete went for a run. What time did the athlete start running?




2:00

3:00



This morning I read a story about my favorite athlete. What time did I start reading the story?



8:00

9:00




Time to the Half Hour

Name: _____

Read the question. Find the answer. Place the time on the clock.

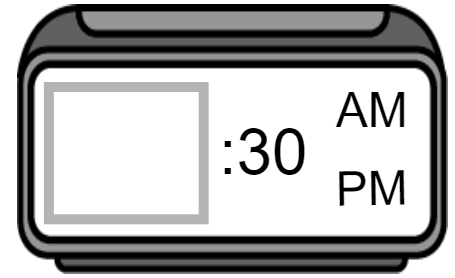
This morning my brother wrote a paper about his favorite athlete. What time did he start writing the paper?




5:30

7:30

10:30



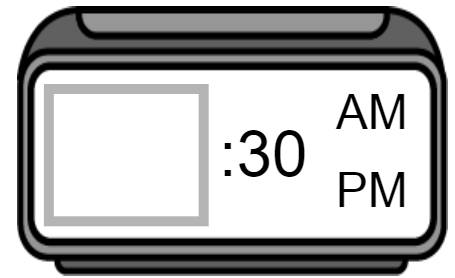
This morning a tennis player bought a new tennis racket. What time did the tennis player buy the new racket?




11:30

9:30

6:30



This afternoon a reporter interviewed a famous skateboarder. What time did the reporter start interviewing the skateboarder?




5:30

4:30

2:30



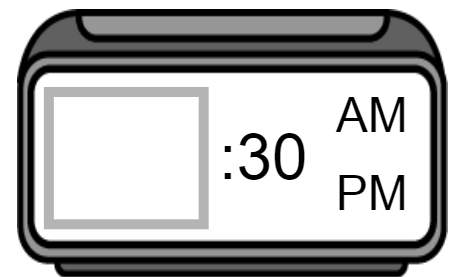
This afternoon an athlete exercised by running six miles. What time did the athlete finish running?




4:30

5:30

6:30



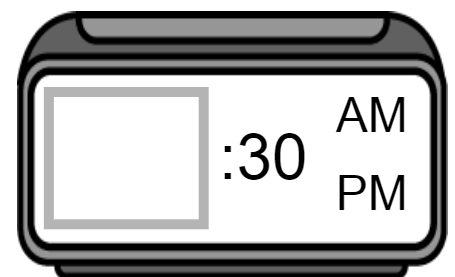
A tennis player played in a tournament today. What time this morning did the tennis tournament start?



9:30

8:30

7:30

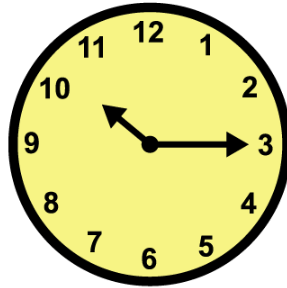


Time to the Quarter Hour

Name: _____

Read the question. Find the answer. Place the time on the clock.

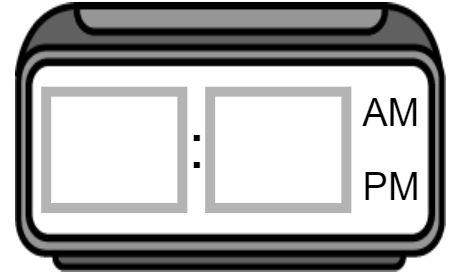
This morning a skateboarder bought a new skateboard. What time did the skateboarder buy the skateboard?




7:15

10:15

12:15



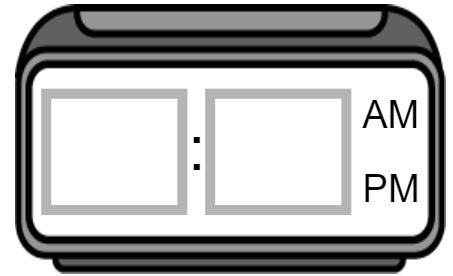
This morning my brother and his friends went to a skatepark. What time did they arrive at the skatepark?



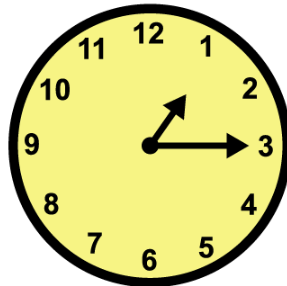
8:45

6:45

5:45



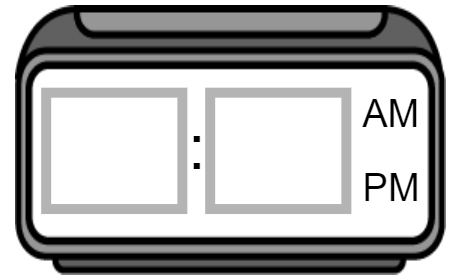
This afternoon a tennis player practiced playing tennis. What time did the tennis player start practicing?




12:15

1:15

3:15



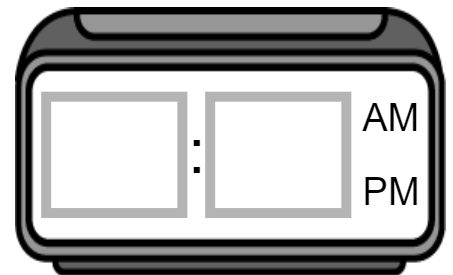
This afternoon I read an article about the Summer Olympics. What time did I start reading the article?




3:15

5:15

4:15



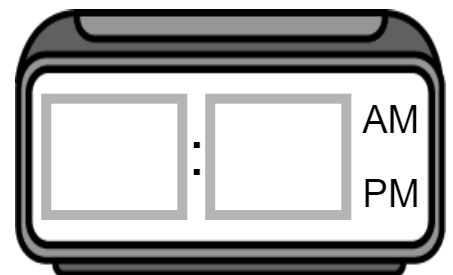
This morning an athlete did exercises. What time did the athlete start doing exercises?



8:45

7:45

6:45

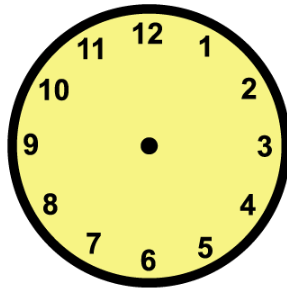


Time Lapse

Name: _____

Read the question. Find the answer. Place the time on the clock.

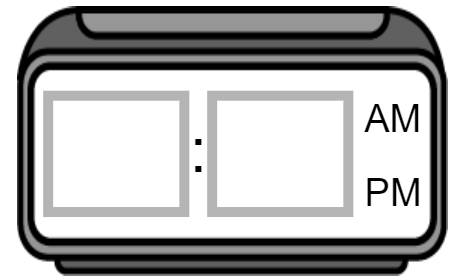
This afternoon a skateboarder practiced doing a trick. She started practicing at 2:00 and practiced for 2 hours. What time did she stop practicing?



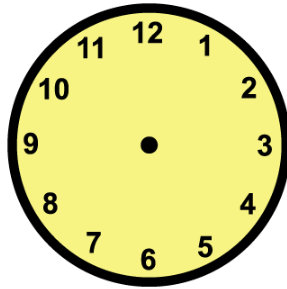
4:00

6:00

1:00



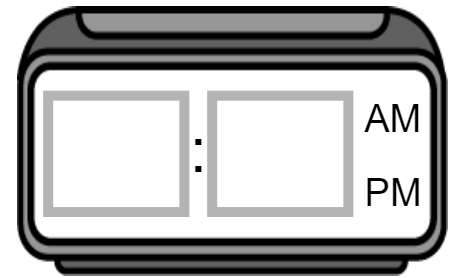
This afternoon I wrote a paper about a tennis player. I started writing at 12:00 and wrote for 1 hour and 30 minutes. What time did I stop writing?



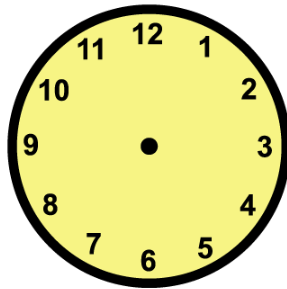
3:30

2:00

1:30



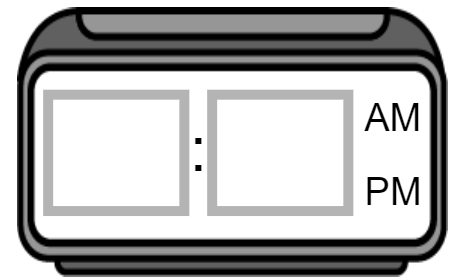
This morning workers started planning a new skatepark. They started planning at 8:30 and planned for 2 hours and 30 minutes. What time did they stop planning?



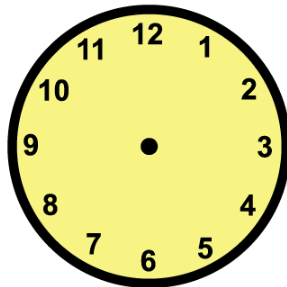
12:00

11:00

9:00



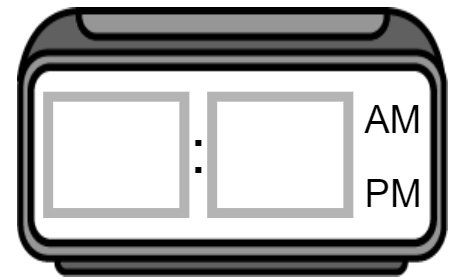
This afternoon a tennis player did an interview. The interview started at 2:30 and lasted 1 hour and 15 minutes. What time did the interview end?




3:15

3:30

3:45



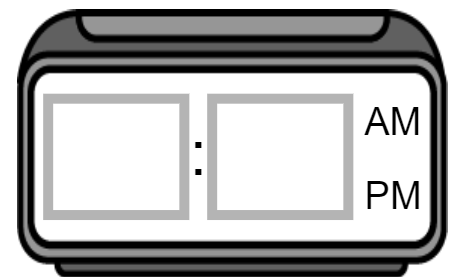
This morning an athlete went for a run. The athlete started running at 6:45 and ran for 1 hour and 30 minutes. What time did the athlete stop running?



8:15

8:30


















7:45

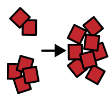


Graphing

Name: _____


- Count the number of symbols in each row. Place that number in the last column.
- Answer the questions about the graph.

net									
medal									
skatepark									
record									
ball									
	1	2	3	4	5	6	7	8	total



1. Which word has the most symbols?

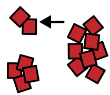

ball



medal



net



2. Which word has the fewest symbols?

medal



skatepark



record



3. What is the highest number?

4

3

5



4. What is the lowest number?

2

4

3



5. Do any words have the same number?

yes



no

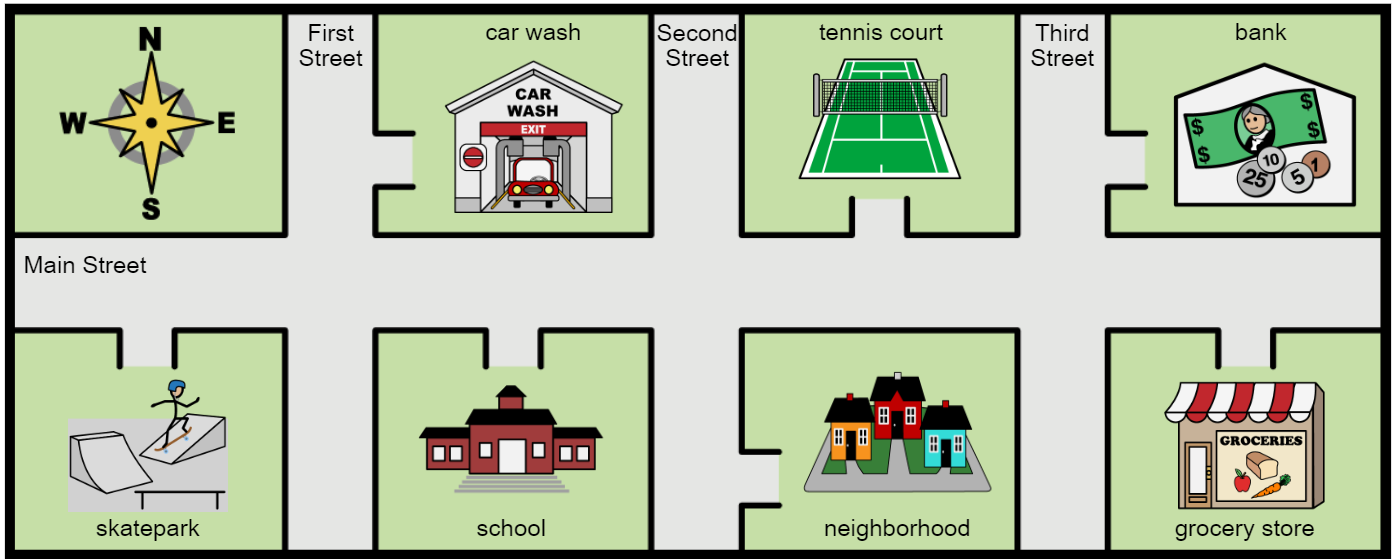


Geography

Name: _____

Use the map to answer the questions.

Tennis court 




What place is this page about?

grocery store

bank

tennis court



neighborhood

skatepark

grocery store



school

car wash

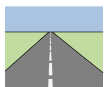
bank



Main Street

First Street

Third Street



What street are both the tennis court and skatepark on?

