

# Read and Do

Name: \_\_\_\_\_

Read each sentence. Do what each sentence says.



1. Color the last hospital yellow.



2. Draw a gray line below the second doctor.



3. Color the first hospital red.



4. Draw a purple rectangle around the first doctor.




5. Draw a blue square around the second hospital.



6. Draw a green oval around the third doctor.


Practice drawing here.



# Look, Read and Think

Name: \_\_\_\_\_


Place an "X" in the box next to the sentence that describes the picture.



A boy and girl shake hands.

A boy is in bed with a fever.


A girl coughs near a boy.



A girl coughs near a boy.

A boy is in bed with a fever.

A boy and girl shake hands.



A boy and girl shake hands.

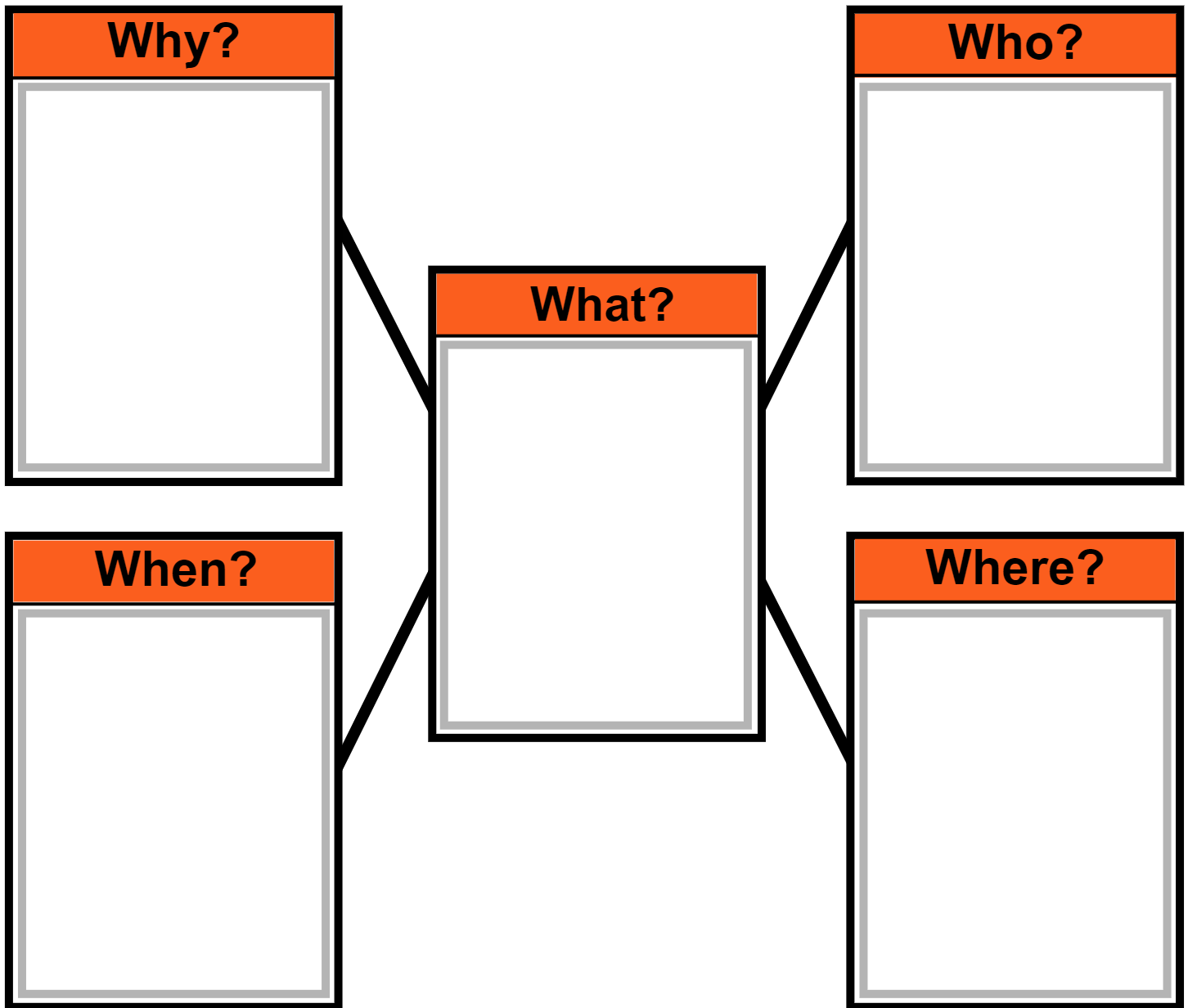
A girl coughs near a boy.





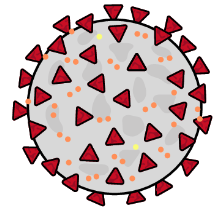
A boy is in bed with a fever.

# Webbing

Name: \_\_\_\_\_

Choose a picture/word card to fill in each part of the web.



<p>now</p> 	<p>many people are sick</p> 	<p>world</p> 	<p>doctor</p> 	<p>Coronavirus</p> 
--	---	--	---	--

# Punctuation

Name: \_\_\_\_\_

A period (.) comes at the end of a statement or telling sentence. (I like to run.)

A question mark (?) comes at the end of a question or asking sentence. (Do you run?)

An exclamation point (!) comes at the end of a sentence to show strong feelings or emotion. (He can run fast!)

---

---

Choose the correct punctuation mark at the end of each sentence.

---

---

1. How does the coronavirus spread

2. What is a pandemic

3. Wash your hands often, for 20 seconds or more

4. Who should you call when you feel sick

5. Leaders have closed public places with crowds

6. Doctors are still learning about the coronavirus

# Capitalization

Name: \_\_\_\_\_

The first word in a sentence begins with a capital letter. Proper nouns are also capitalized. Proper nouns name a specific noun such as a person's name, a city, an ocean, state or country.

---



Circle the capital letters.

1. The coronavirus gave Joe a fever and a cough.
  2. People think the coronavirus started in China in 2019.
  3. It spread to many countries, including the U.S.
- 



Underline the letters that should be capitalized.

4. mary should call her doctor when she feels sick.
5. the world includes earth and everything on earth.
6. the u.s. is one country in the world.

# Capitalization and Punctuation

Name: \_\_\_\_\_

1. Circle all the capitalization and punctuation errors in each sentence.
2. Write the corrected sentence below each sentence.

---

1. Many people around the World are sick.

---

---

(1 error)

2. Anyone can become sick with the coronaVirus

---

---

(2 errors)

3. some People become Very sick.

---

---

(3 errors)

4. students are Doing classes Online in their Homes.

---

---

(4 errors)

5. what are Doctors still Learning About.

---











---

(5 errors)

# Which Comes Next?

Name: \_\_\_\_\_

1. Look at each symbol pattern.
2. Circle the symbol that comes next.

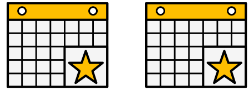


# Word Problems

Name: \_\_\_\_\_


Fill in the blanks. Solve each word problem.

On Monday a leader canceled \_\_\_\_\_ events.



Show your work.

On Tuesday the leader canceled \_\_\_\_\_ events.




+

How many events did the leader cancel altogether?


Answer

On Wednesday I did \_\_\_\_\_ classes online.



Show your work.

On Thursday I did \_\_\_\_\_ classes online.



-

How many more classes did I do online on Wednesday than on Thursday?

Answer




# Time to the Hour

Name: \_\_\_\_\_

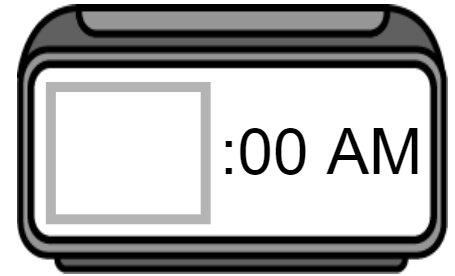
Read the question. Find the answer. Place the time on the clock.

This morning a doctor went to work at a hospital. What time did the doctor arrive at the hospital?




7:00

4:00



This morning my brother, my mom and I did a science experiment at home. What time did we start doing the science experiment?




12:00

10:00



A leader gave a speech about the coronavirus this afternoon. What time did the speech start?




1:00

2:00



This afternoon a band canceled a concert. What time did the band cancel the concert?




5:00

4:00



This evening doctors in a doctor's office had a meeting about the coronavirus. What time did the meeting start?



6:00

7:00




# Time to the Half Hour

Name: \_\_\_\_\_

Read the question. Find the answer. Place the time on the clock.

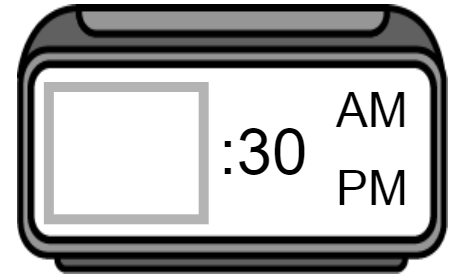
This afternoon my dad read an article about staying healthy. What time did he start reading the article?




4:30

6:30

1:30



This morning a nurse went to work at a doctor's office. What time did the nurse arrive at the doctor's office?




12:30

10:30

8:30



This afternoon my teacher posted homework online. What time did she post the homework?




12:30

2:30

1:30



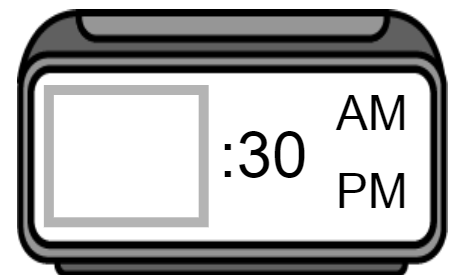
This morning my friend and her mom worked on a social studies lesson together. What time did they start working on the social studies lesson?




6:30

10:30

11:30



This afternoon a family watched a movie together at home. What time did the family start watching the movie?



4:30

2:30

3:30




# Time to the Quarter Hour

Name: \_\_\_\_\_

Read the question. Find the answer. Place the time on the clock.

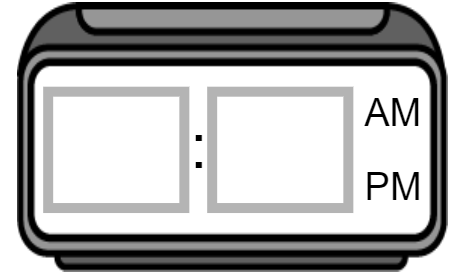
This morning my brother and I did math worksheets at home. What time did we start doing math worksheets?




6:45

8:15

11:15



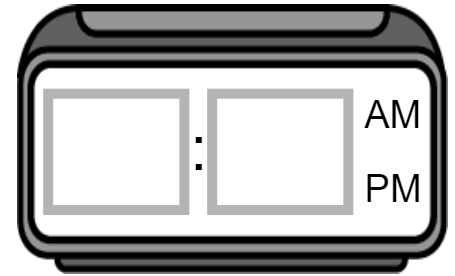
This afternoon a leader gave a speech about staying healthy. What time did the speech start?




1:45

3:45

5:45



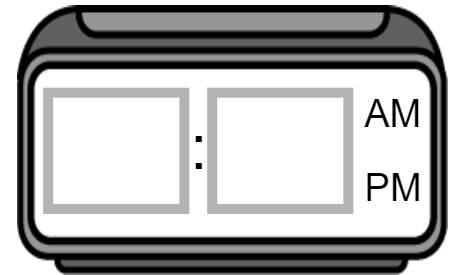
This morning my teacher posted a science lesson online. What time did my teacher post the science lesson?




5:45

7:45

8:45



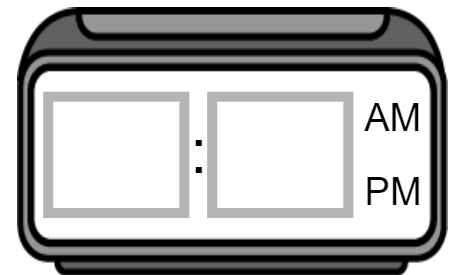
This afternoon a doctor went to work at a hospital. What time did the doctor arrive at the hospital?



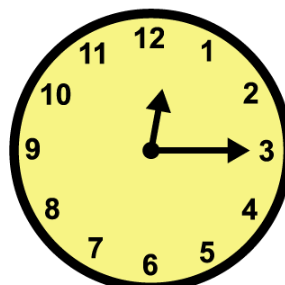
6:15

5:15

3:15



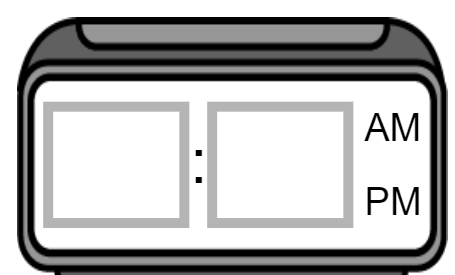
This afternoon a worker fed animals in a zoo. What time did the worker start feeding the animals?



3:15

1:15

12:15

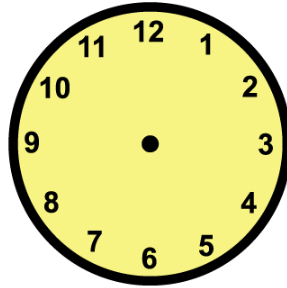


# Time Lapse

Name: \_\_\_\_\_

Read the question. Find the answer. Place the time on the clock.

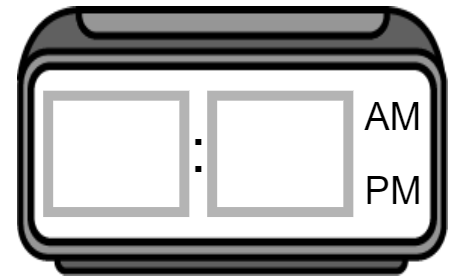
This afternoon I read a book about being healthy. I started reading at 1:00 and read for 1 hour. What time did I stop reading?



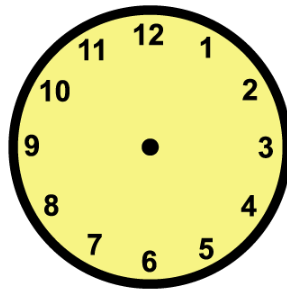
6:00

2:00

4:00



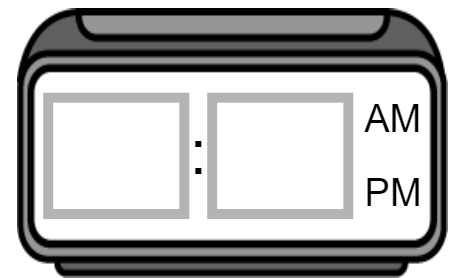
This afternoon a leader gave a speech about the coronavirus. The speech started at 4:00 and lasted 30 minutes. What time did the speech end?



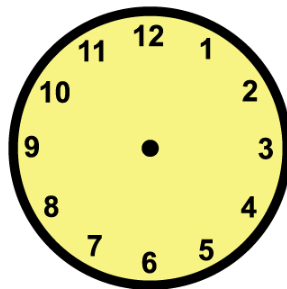
4:30

3:00

6:30



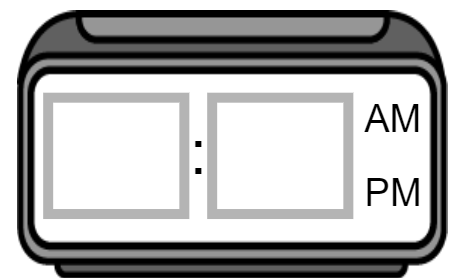
This morning my brother did a class online. The class started at 9:30 and lasted 1 hour and 30 minutes. What time did the class end?



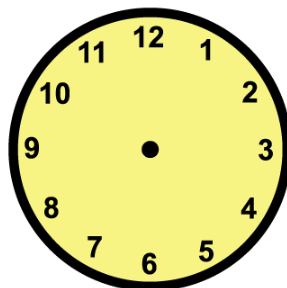
12:00

10:00

11:00



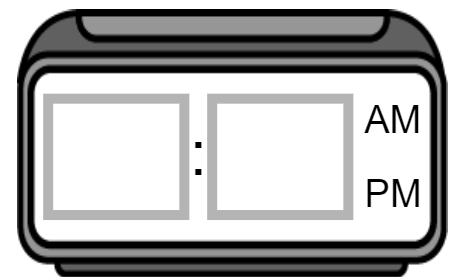
A doctor started working at a hospital this morning at 9:30. The doctor worked for 9 hours and 15 minutes. What time did the doctor stop working?



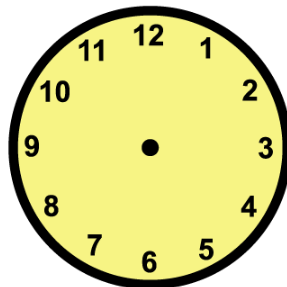
5:45

6:45

7:15



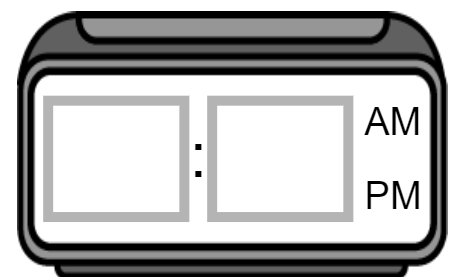
This morning my teacher gave a science lesson online. The lesson started at 7:30 and lasted 1 hour and 45 minutes. What time did the science lesson end?



9:15

9:30

























9:45

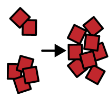


# Graphing

Name: \_\_\_\_\_

- Count the number of symbols in each row. Place that number in the last column.
- Answer the questions about the graph.

doctor									
event									
hospital									
cruise ship									
concert									
	1	2	3	4	5	6	7	8	total

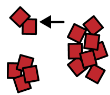
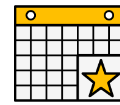


1. Which word has the most symbols?

concert

event

doctor

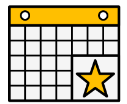


2. Which word has the fewest symbols?

hospital

cruise ship

event



3. What is the highest number?

5

7

4




4. What is the lowest number?

7

6

2



5. Do any words have the same number?

yes

no

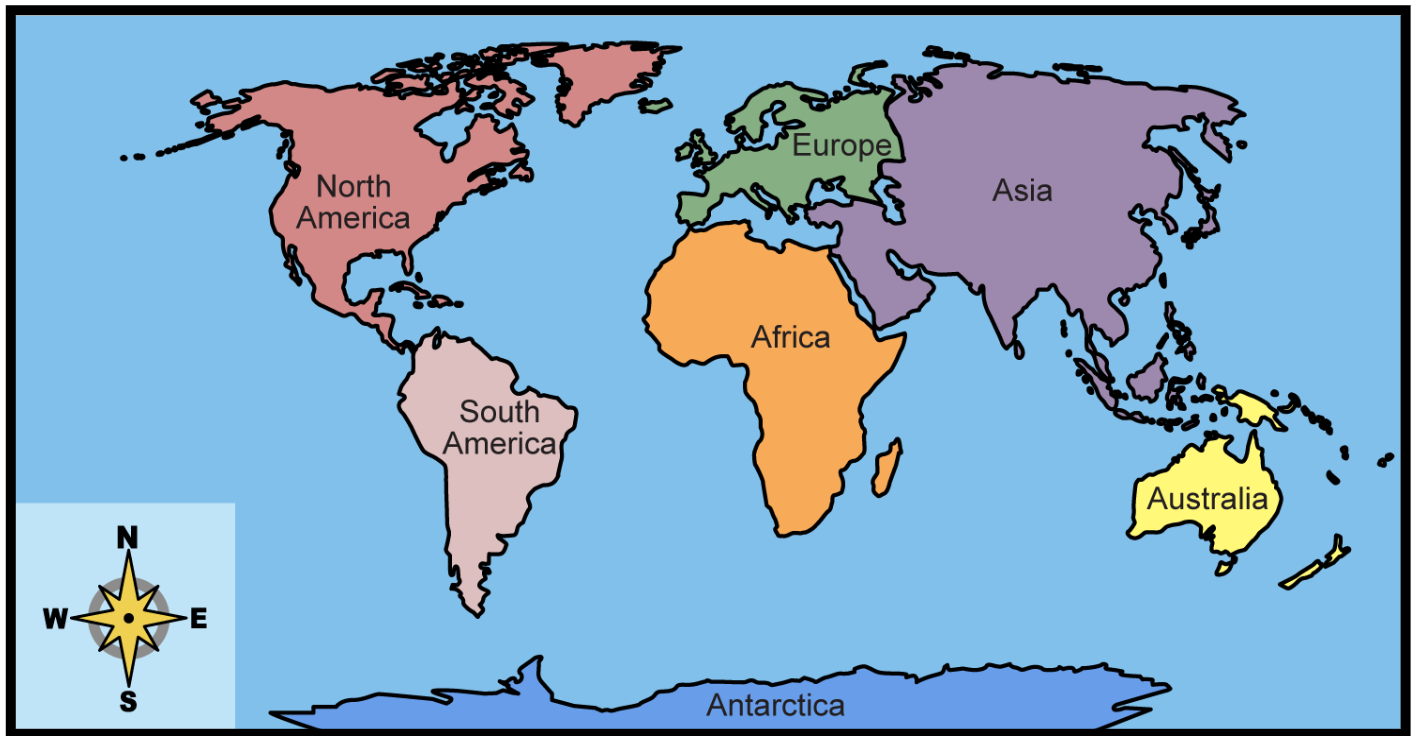


# Geography

Name: \_\_\_\_\_

Use the map to answer the questions.

World 



What place is this page about?

Mars

world

Venus



ten

seven

three

**10**

**7**

**3**



How many continents does the world have?

Australia

Europe

Asia



What continent is the biggest?