








Read and Do


Name: _____

Read each sentence. Do what each sentence says.



-  1. Draw a green rectangle around the first person.
-  2. Draw a blue cloud above the third plane.
-  3. Draw a purple triangle around the last person.
-  4. Draw a yellow sun above the second plane.
-  5. Color the first plane gray.
-  6. Draw a red oval around the second person.


Practice drawing here.



Look, Read and Think

Name: _____


Place an "X" in the box next to the sentence that describes the picture.



A girl protests flying on planes.

A girl thinks about the Earth.


A girl gives a speech about climate change.



A girl thinks about the Earth.

A girl gives a speech about climate change.

A girl protests flying on planes.



A girl gives a speech about climate change.

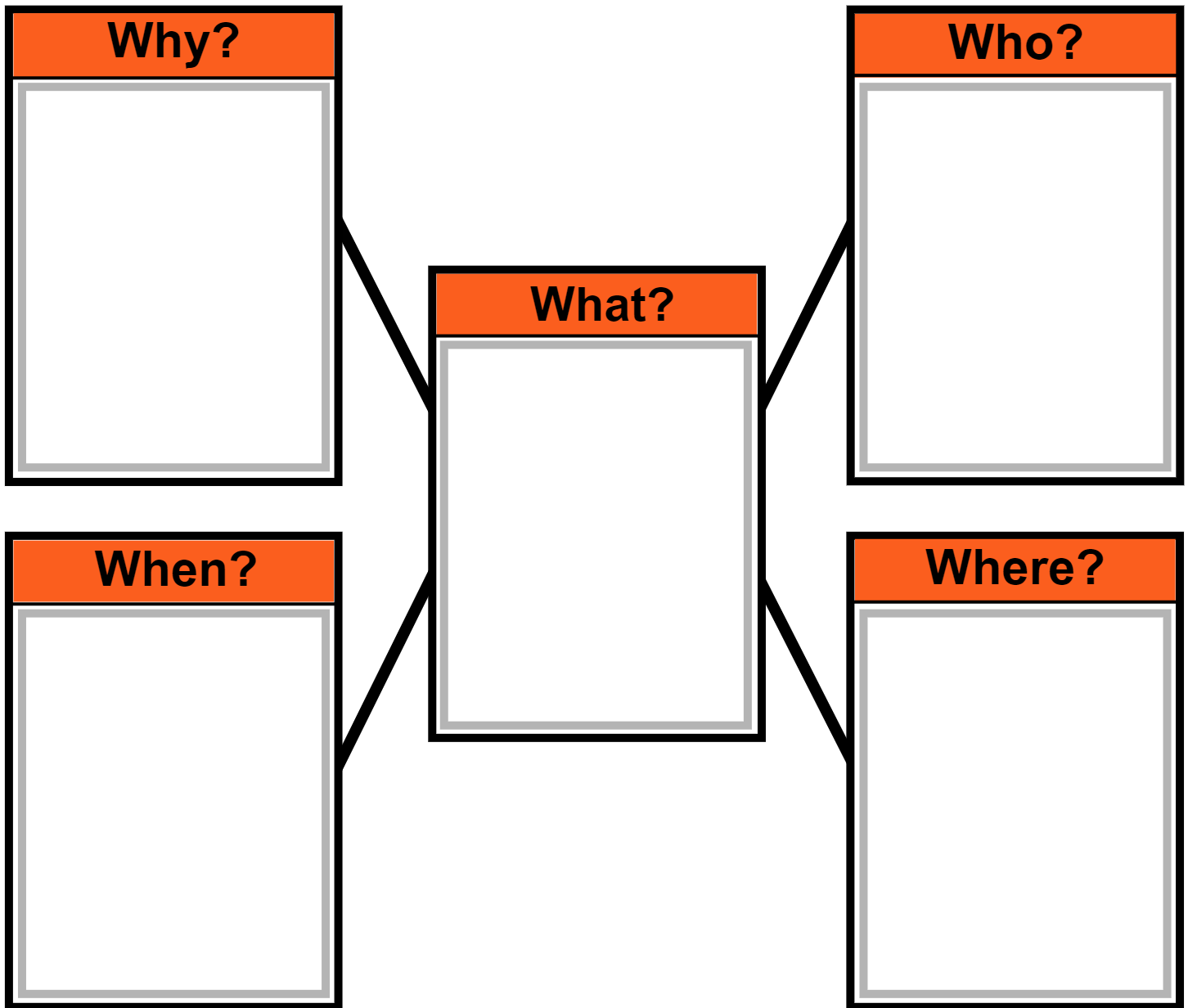
A girl protests flying on planes.






A girl thinks about the Earth.

Webbing

Name: _____

Choose a picture/word card to fill in each part of the web.



<p>Sweden</p> 	<p>Greta Thunberg and Earth</p> 	<p>April 22</p>  <p>22</p>	<p>Greta Thunberg</p> 	<p>protect Earth</p> 
---	---	---	--	--

Punctuation

Name: _____

A period (.) comes at the end of a statement or telling sentence. (I like to run.)

A question mark (?) comes at the end of a question or asking sentence. (Do you run?)

An exclamation point (!) comes at the end of a sentence to show strong feelings or emotion. (He can run fast!)

Choose the correct punctuation mark at the end of each sentence.

1. Where was Greta born

2. Greta gives speeches about climate change

3. Climate is the usual weather in a place

4. What does Greta want to help stop

5. Why is protecting Earth important

6. Greta is brave

Capitalization

Name: _____

The first word in a sentence begins with a capital letter. Proper nouns are also capitalized. Proper nouns name a specific noun such as a person's name, a city, an ocean, state or country.



Circle the capital letters.

1. Earth Day is April 22.
 2. Greta was born in Sweden.
 3. She is the youngest person to be Person of the Year.
-



Underline the letters that should be capitalized.

4. climate change could be dangerous for earth!
5. students around the world heard about greta.
6. protecting earth is important to greta thunberg.

Capitalization and Punctuation

Name: _____

1. Circle all the capitalization and punctuation errors in each sentence.
2. Write the corrected sentence below each sentence.

1. Many people celebrate protecting Earth on earth Day.

(1 error)

2. Greta gives Speeches about Climate change.

(2 errors)

3. Many People think the Climate is changing

(3 errors)

4. greta talks to Leaders about Climate Change.

(4 errors)

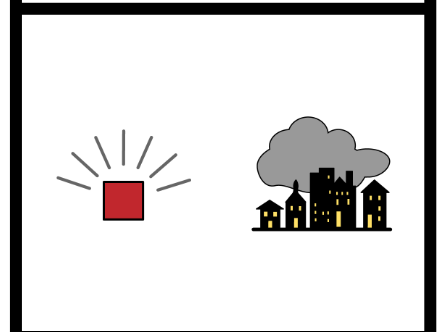
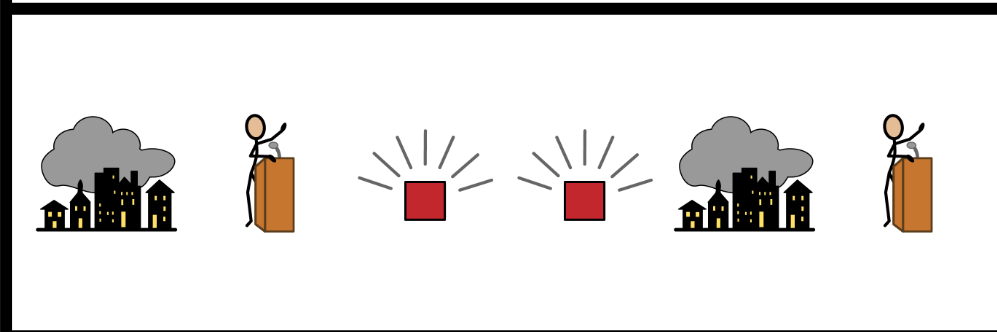

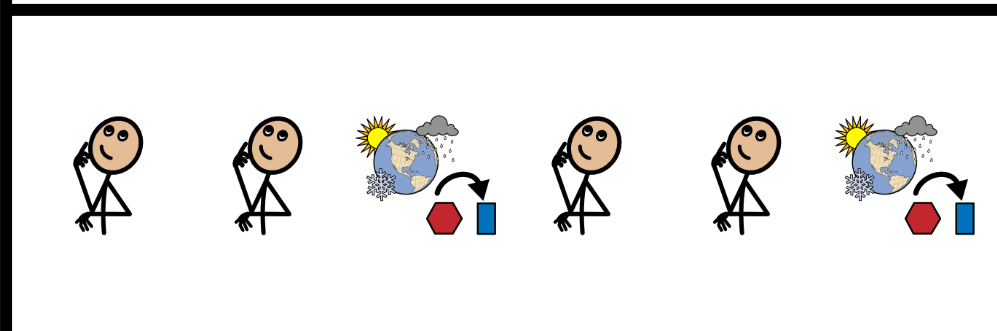
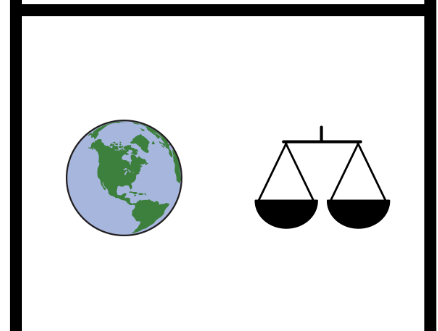
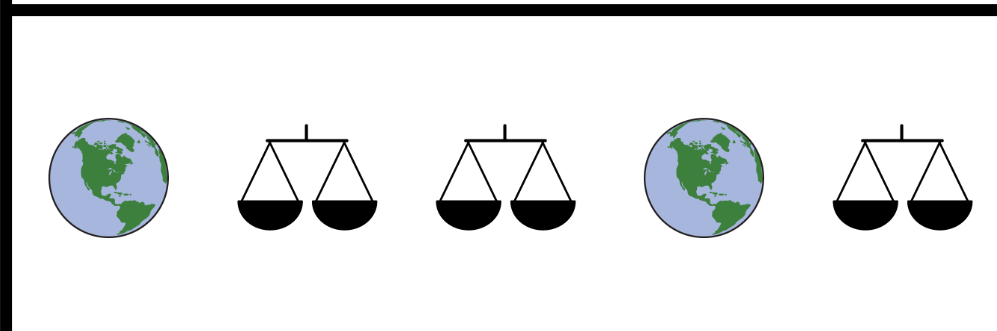




5. Greta asks Other People to protect earth Too

(5 errors)

Which Comes Next?

Name: _____

1. Look at each symbol pattern.
2. Circle the symbol that comes next.



Word Problems

Name: _____

Fill in the blanks. Solve each word problem.

In 2018 a city had _____ floods.



Show your work.

In 2019 the city had _____ floods.

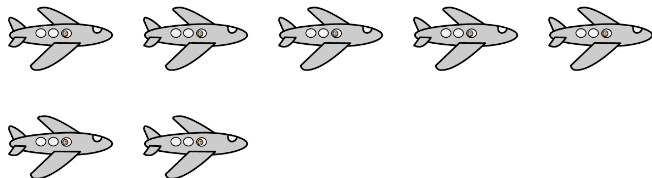


+

How many floods did the city have altogether?

Answer

In 2017 a family flew in _____ planes.



Show your work.

In 2019 the family flew in _____ plane.



-

How many more planes did the family fly in in 2017 than in 2019?


Answer

Time to the Hour

Name: _____

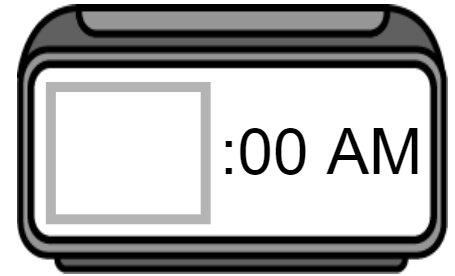
Read the question. Find the answer. Place the time on the clock.

This morning in science class, my teacher talked about celebrating Earth Day. What time did science class start?




8:00

11:00

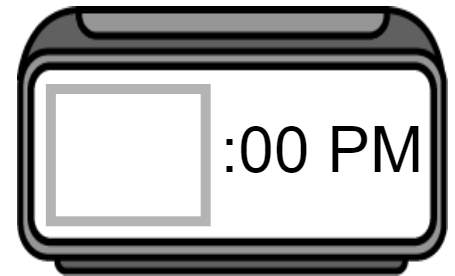


This afternoon my sister did a craft to celebrate Earth Day. What time did my sister start doing the craft?




5:00

2:00



This afternoon Greta Thunberg had a meeting with students. What time did the meeting start?




2:00

4:00



This evening my parents watched a TV show about climate change. What time did the TV show start?




7:00

6:00



This morning government leaders talked about a new law. What time did they start talking about the new law?



10:00

9:00




Time to the Half Hour

Name: _____

Read the question. Find the answer. Place the time on the clock.

This afternoon in social studies class, I learned about laws. What time did social studies class end?




5:30

3:30

1:30



This afternoon my teacher read a newspaper article about Greta Thunberg. What time did my teacher start reading the article?




2:30

5:30

7:30



This morning a city had a storm. What time did the storm start?




7:30

9:30

10:30



This morning my parents talked about climate change. What time did they start talking about climate change?




6:30

10:30

9:30



Today a scientist studied the climate in North America. What time this morning did the scientist start studying the climate?



12:30

11:30

10:30




Time to the Quarter Hour

Name: _____

Read the question. Find the answer. Place the time on the clock.

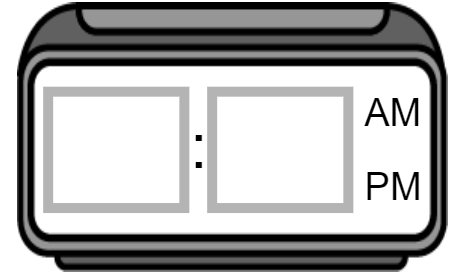
This afternoon a scientist gave a speech about protecting Earth. What time did the speech end?



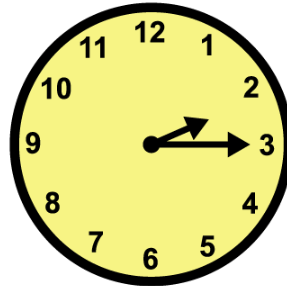
7:45

4:45

1:45



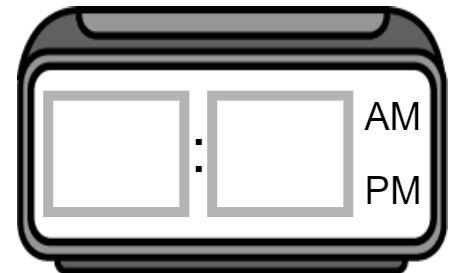
This afternoon a reporter interviewed Greta Thunberg. What time did the interview start?




12:15

2:15

5:15



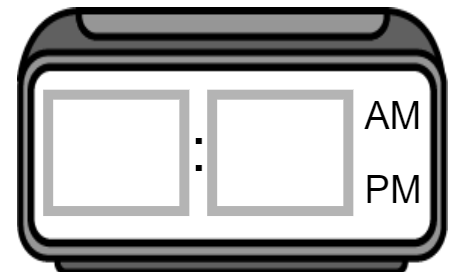
This morning in social studies class, my sister learned about Sweden. What time did social studies class start?




10:15

11:15

12:15



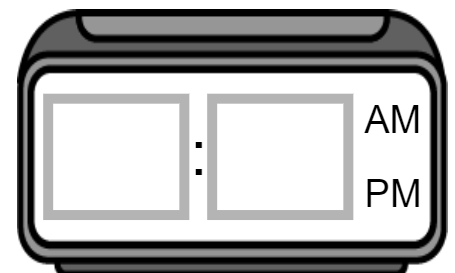
This morning my family planted a tree to celebrate Earth Day. What time did we start planting the tree?




10:45

9:45

8:45



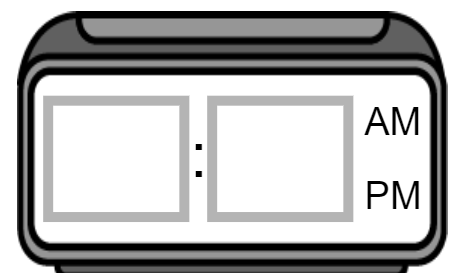
This afternoon my brother and mom did an experiment about weather. What time did they start doing the experiment?



3:15

2:15

4:15

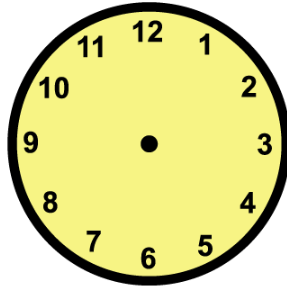


Time Lapse

Name: _____

Read the question. Find the answer. Place the time on the clock.

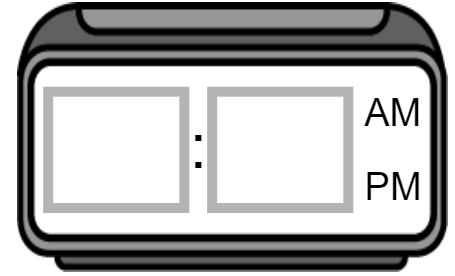
This morning my mom read an article about climate change. She started reading at 6:00 and read for 1 hour. What time did she stop reading?



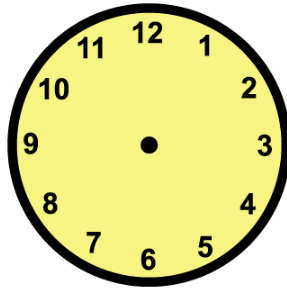
7:00

10:00

11:00



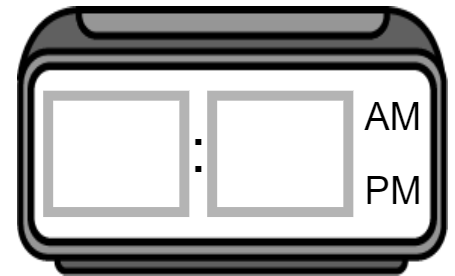
This morning Greta Thunberg gave a speech. The speech started at 11:00 and lasted 30 minutes. What time did the speech end?



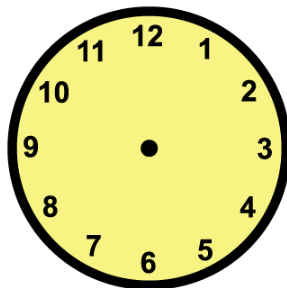
12:30

11:30

9:30



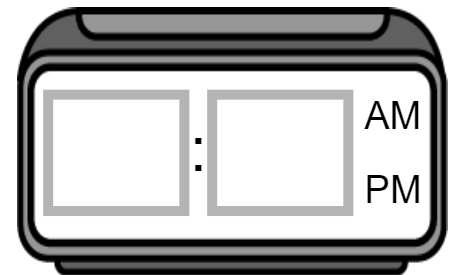
This afternoon my brother and I did Earth Day crafts. We started doing crafts at 2:30 and did crafts for 1 hour and 30 minutes. What time did we stop doing crafts?



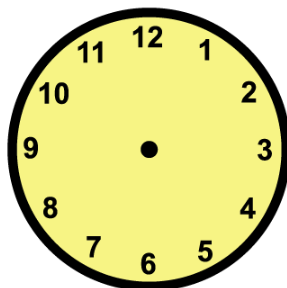
3:30

4:00

5:00



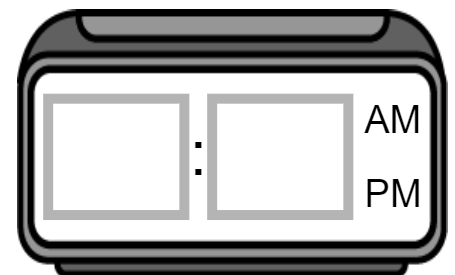
This morning my friend read a book about Sweden. My friend started reading at 8:30 and read for 1 hour and 15 minutes. What time did my friend stop reading?



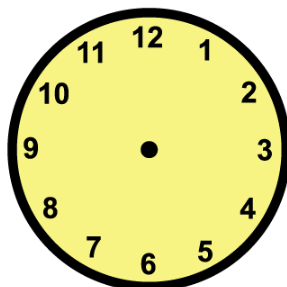
10:15

10:00

9:45



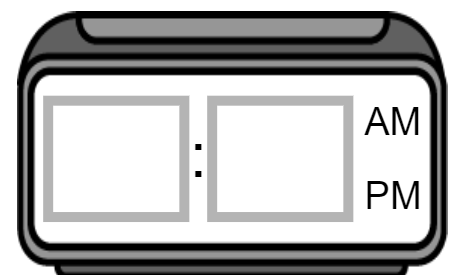
This morning at 9:30, leaders started talking about a new law. They talked about the law for 3 hours and 45 minutes. What time did they stop talking about the law?



1:15

1:30


























1:45

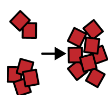


Graphing

Name: _____

- Count the number of symbols in each row. Place that number in the last column.
- Answer the questions about the graph.

plane									
flood									
storm									
wildfire									
speech									
	1	2	3	4	5	6	7	8	total

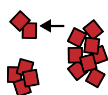


1. Which word has the most symbols?

wildfire

speech

plane



2. Which word has the fewest symbols?

storm

wildfire

flood



3. What is the highest number?

4

5

8



4. What is the lowest number?

2

6

4



5. Do any words have the same number?

yes

no



Geography

Name: _____


Use the map to answer the questions.

Sweden 



What place is this page about?


U.S.



Sweden



Uganda



Norway



Finland



Russia



What country is west of Sweden?

Lake Erie



Indian Ocean



Baltic Sea



What body of water borders Sweden?