


Read and Do

Name: _____

Read each sentence. Do what each sentence says.



1. Color the third basketball brown.



2. Draw a blue oval around the first champion.



3. Color the first basketball red.



4. Draw a green rectangle around the third champion.




5. Color the second basketball orange.



6. Draw a gray line below the second champion.

Practice drawing here.



Look, Read and Think

Name: _____

Place an "X" in the box next to the sentence that describes the picture.



A basketball player stands behind a ball.

Basketball players play basketball.

A basketball player holds a trophy.



A basketball player holds a trophy.

A basketball player stands behind a ball.

Basketball players play basketball.



Basketball players play basketball.

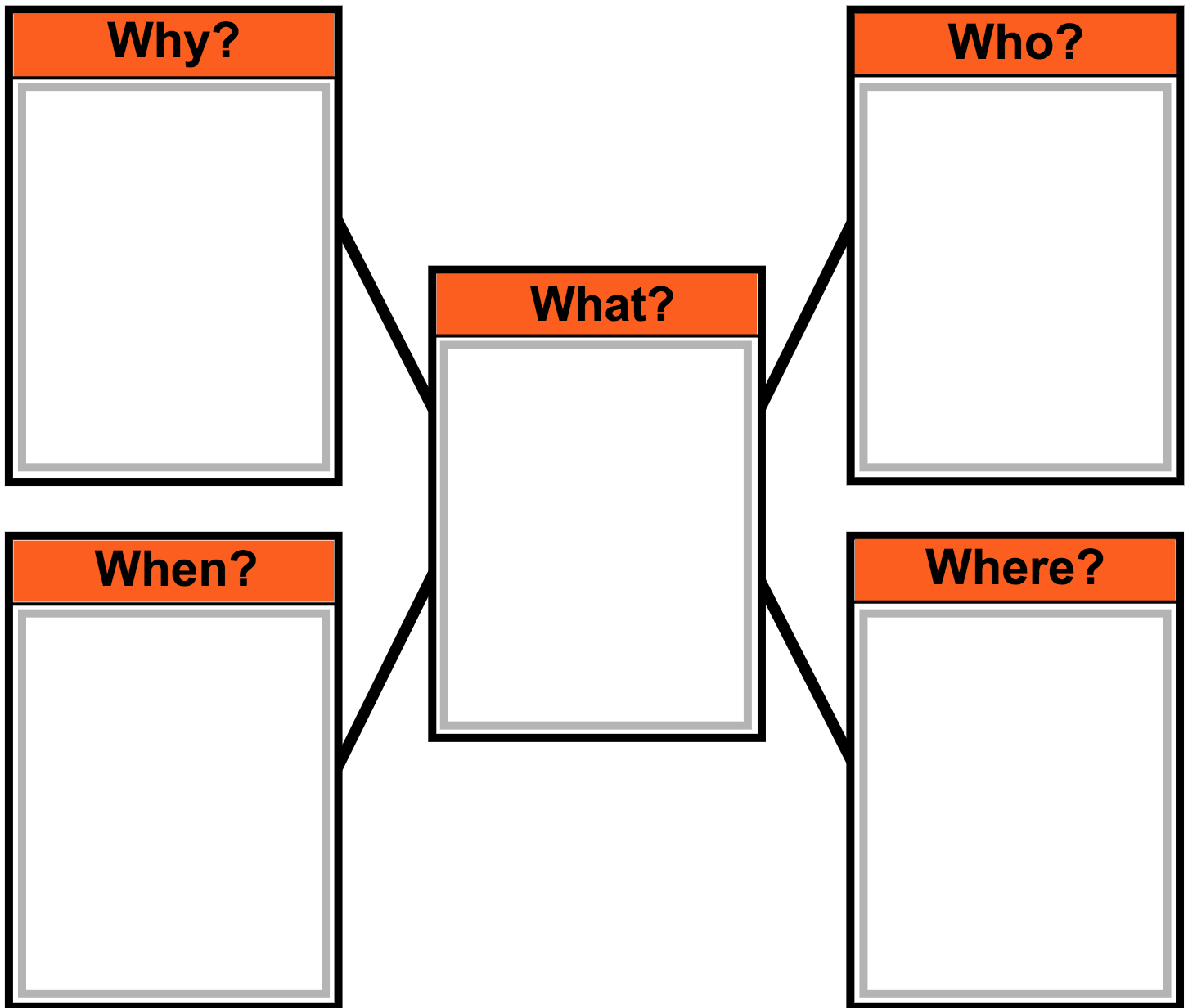
A basketball player holds a trophy.






A basketball player stands behind a ball.

Webbing

Name: _____

Choose a picture/word card to fill in each part of the web.



<p>Atlanta, Georgia</p> 	<p>March Madness</p> 	<p>win tournament</p> 	<p>college basketball teams</p> 	<p>March</p> 
---	--	---	--	--

Punctuation

Name: _____

A period (.) comes at the end of a statement or telling sentence. (I like to run.)

A question mark (?) comes at the end of a question or asking sentence. (Do you run?)

An exclamation point (!) comes at the end of a sentence to show strong feelings or emotion. (He can run fast!)

Choose the correct punctuation mark at the end of each sentence.

1. The best teams win many games

2. What teams will be in the 2020 tournament

3. The games are exciting to watch

4. Soon only two teams will be left

5. Where will the championship game be

6. You can guess too

Capitalization

Name: _____

The first word in a sentence begins with a capital letter. Proper nouns are also capitalized. Proper nouns name a specific noun such as a person's name, a city, an ocean, state or country.



Circle the capital letters.

1. People call this big tournament March Madness.
2. This tournament starts on March 17.
3. The championship game will be on April 6.



Underline the letters that should be capitalized.

4. the game will be in atlanta, georgia.
5. the article will be online march 30.
6. this article will include a march madness bracket.

Capitalization and Punctuation

Name: _____

1. Circle all the capitalization and punctuation errors in each sentence.
2. Write the corrected sentence below each sentence.

1. The NCAA® invites the best 68 College teams.

(1 error)

2. tournament games are in Cities across the U.S.

(2 errors)

3. These two Teams will Play in a championship Game.

(3 errors)

4. a bracket is a List of Teams in the tournament

(4 errors)





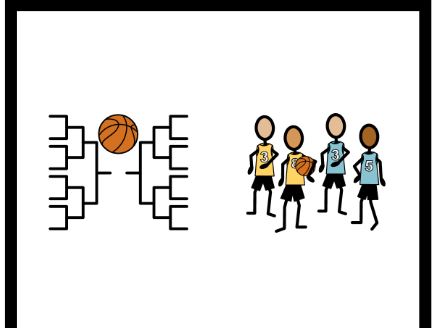
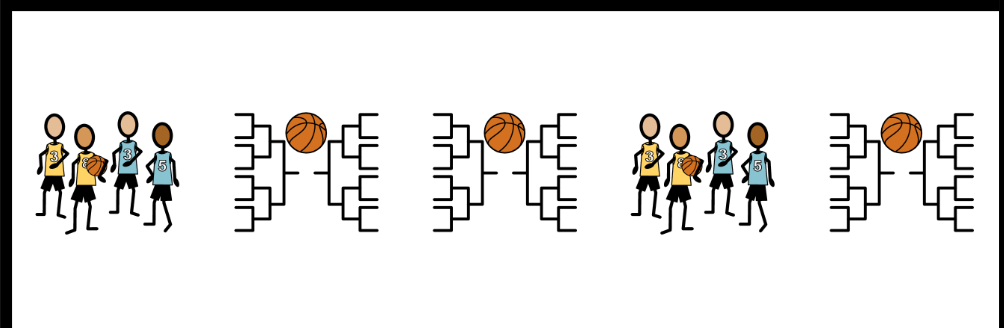
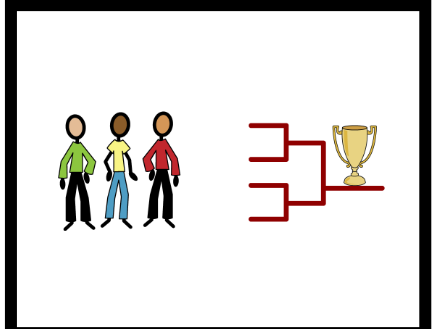
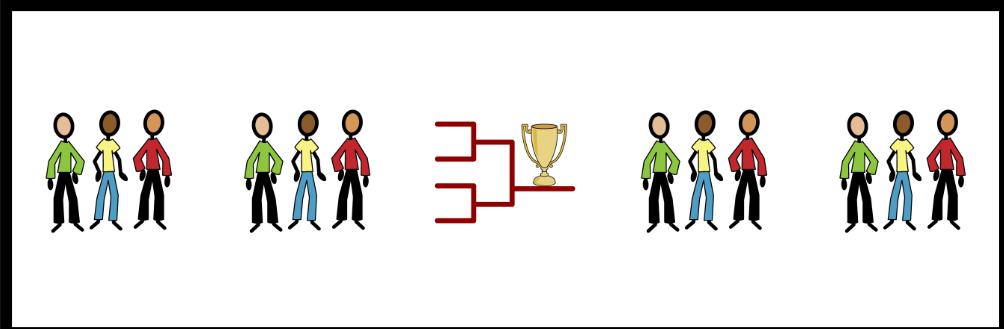


5. will you watch march madness games.

(4 errors)

Which Comes Next?

Name: _____

1. Look at each symbol pattern.
2. Circle the symbol that comes next.

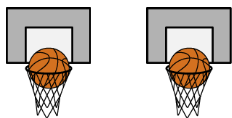


Word Problems

Name: _____

Fill in the blanks. Solve each word problem.

One week my sister played in _____ basketball games.



Show your work.

Another week my sister played in _____ basketball games.




+

How many basketball games did my sister play in altogether?

Answer

During November a team played in _____ stadiums.



Show your work.

During December the team played in _____ stadiums.



-

How many more stadiums did the team play in during November than during December?


Answer

Time to the Hour

Name: _____

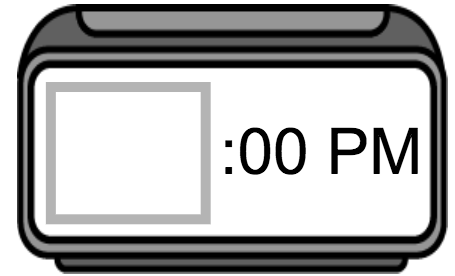
Read the question. Find the answer. Place the time on the clock.

This afternoon my brother and his friends played in a basketball game. What time did the basketball game start?




4:00

8:00



This morning janitors cleaned a stadium. What time did the janitors start cleaning the stadium?




10:00

7:00



This morning a family traveled to Atlanta, Georgia. What time did the family arrive in Atlanta?




11:00

9:00



This afternoon a basketball team had a practice. What time did the practice start?




1:00

2:00



This afternoon a college student went to class. What time did the class start?



4:00

3:00




Time to the Half Hour

Name: _____

Read the question. Find the answer. Place the time on the clock.

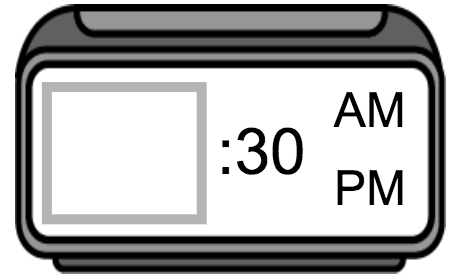
This morning my sister played basketball in gym class. What time did gym class start?




1:30

5:30

10:30



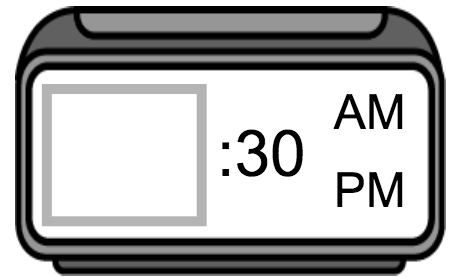
This afternoon a family watched a basketball game on TV. What time did the family start watching the basketball game?




2:30

4:30

6:30



This afternoon my teacher filled in a March Madness bracket. What time did my teacher start filling in the bracket?




3:30

4:30

5:30



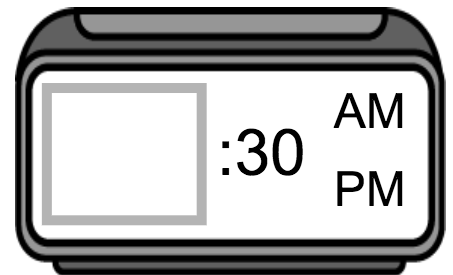
This evening a basketball team had a practice. What time did the practice start?




7:30

6:30

5:30



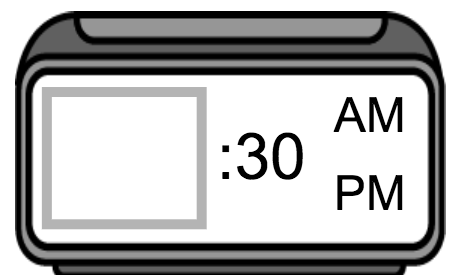
A basketball team played in a tournament today. What time this morning did the tournament start?



8:30

9:30

7:30




Time to the Quarter Hour

Name: _____

Read the question. Find the answer. Place the time on the clock.

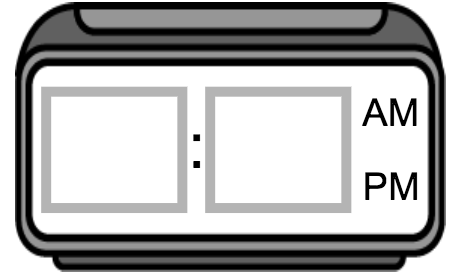
This afternoon a basketball player went for a run. What time did the basketball player start running?




5:15

3:45

12:45



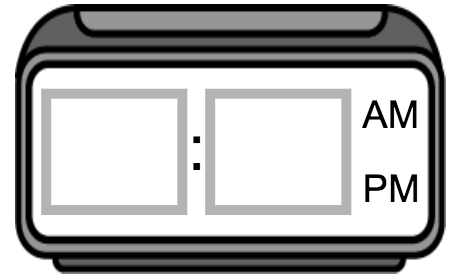
This morning janitors cleaned a stadium. What time did the janitors start cleaning the stadium?




7:15

5:15

9:15



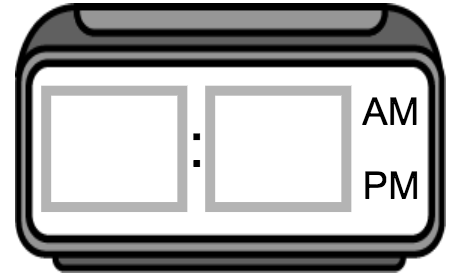
This morning a college basketball player went to a science class. What time did the class start?




8:15

10:15

7:15



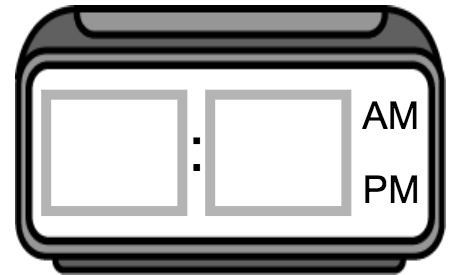
This afternoon a reporter interviewed a basketball coach. What time did the interview start?




3:45

4:45

9:45



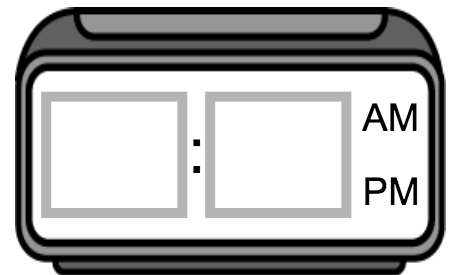
This evening my brother played in a basketball game. What time did the basketball game start?



6:15

7:45

6:45

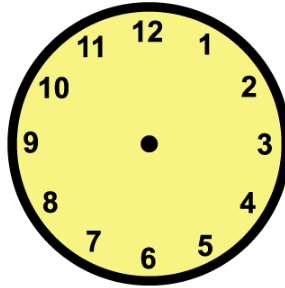


Time Lapse

Name: _____

Read the question. Find the answer. Place the time on the clock.

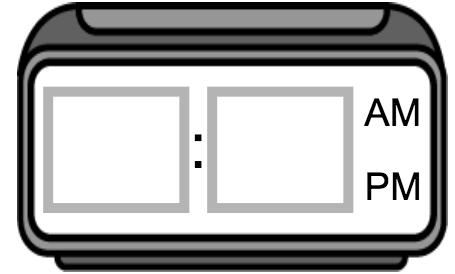
This morning in gym class, I played basketball. Gym class started at 10:00 and lasted 1 hour. What time did gym class end?



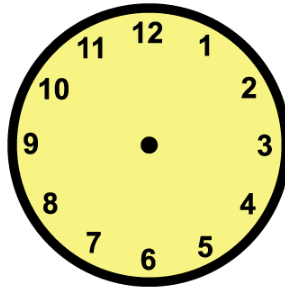
8:00

11:00

1:00



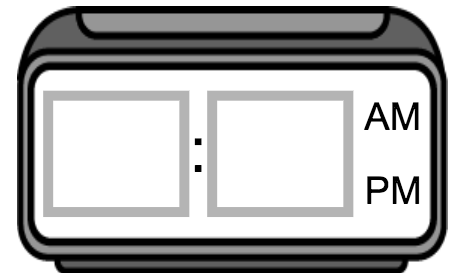
This morning a basketball player worked out. He started working out at 6:00 and worked out for 2 hours and 30 minutes. What time did he stop working out?



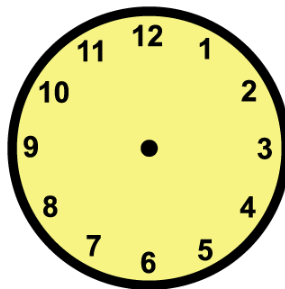
10:30

11:00

8:30



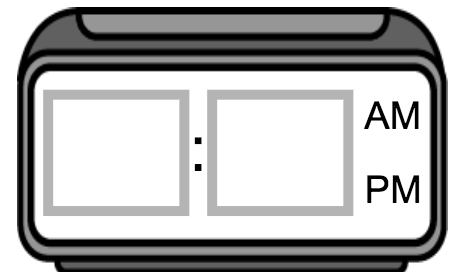
This afternoon a family went to a basketball game. The basketball game started at 12:30 and lasted 1 hour and 30 minutes. What time did the basketball game end?



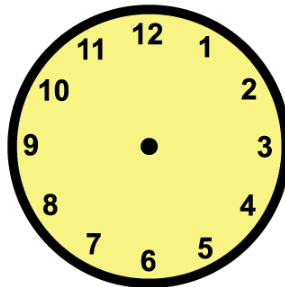
2:00

3:30

3:00



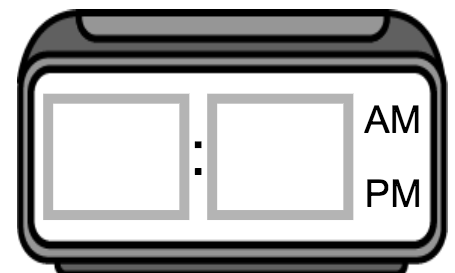
This morning janitors cleaned a stadium. The janitors started cleaning at 6:30 and cleaned for 3 hours and 15 minutes. What time did they stop cleaning?



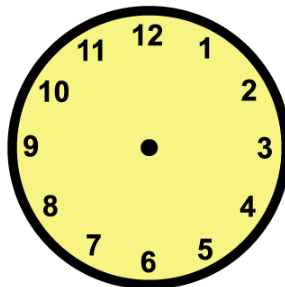
9:45

10:45

9:30



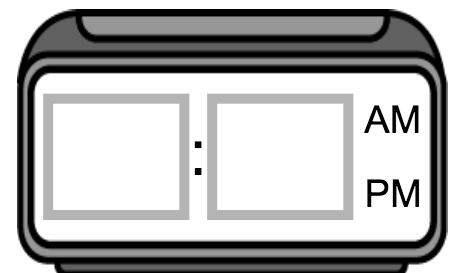
A basketball team played in a tournament today. The tournament started at 9:30 this morning and lasted 7 hours and 45 minutes. What time did the tournament end?



5:30

5:00






















5:15

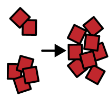


Graphing

Name: _____

- Count the number of symbols in each row. Place that number in the last column.
- Answer the questions about the graph.

team									
game									
stadium									
college									
champion									
	1	2	3	4	5	6	7	8	total

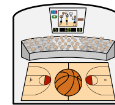


1. Which word has the most symbols?

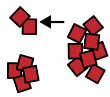
game



stadium



champion



2. Which word has the fewest symbols?

team



game



college



3. What is the highest number?

1

5

7



4. What is the lowest number?

5

1

4



5. Do any words have the same number?

yes



no



Geography

Name: _____

Use the map to answer the questions.

Atlanta, Georgia 



What place is this page about?

Atlanta, Georgia



Cincinnati, Ohio



Reno, Nevada



What state is south of Georgia?

North Carolina (NC)



Tennessee (TN)



Florida (FL)



What body of water borders Georgia?

Atlantic Ocean



Colorado River



Lake Superior

