

Word Sort

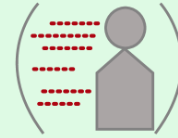
Name: _____

1. Cut out the words/pictures. Glue the top section of the page to construction paper.
2. Sort the nouns and verbs.


Nouns




Verbs




April



eat



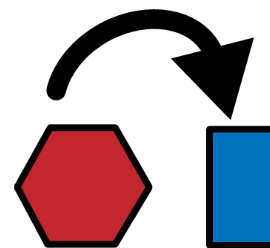
feel




everyone




school



change



sleep





homework

Sentence Completion


Name: _____


Choose a picture to complete the sentence.



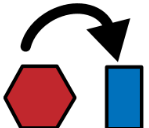


1.  feels stress sometimes.

2. Changes at school and home can cause .

3. Stress can  your feelings.

4. You may  less happy or less excited.

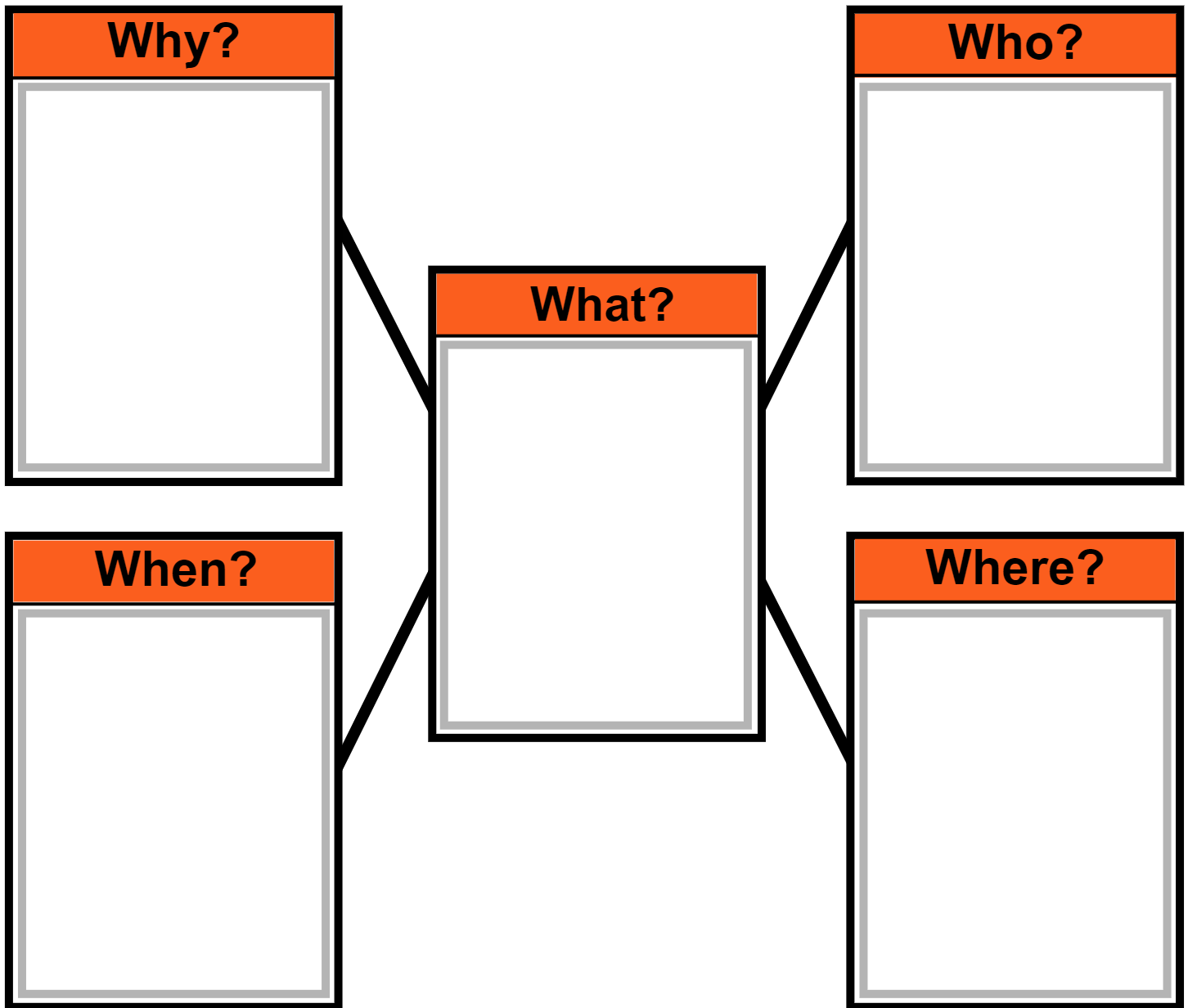
5. You can  to someone about stress.






<p>feel</p> 	<p>stress</p> 	<p>change</p> 	<p>talk</p> 	<p>Everyone</p> 
---	---	---	---	---

Webbing

Name: _____

Choose a picture/word card to fill in each part of the web.



<p>school counselor</p> 	<p>Stress Awareness Month</p> 	<p>school</p> 	<p>learn about stress</p> 	<p>April</p> 
---	---	---	--	--

Punctuation

Name: _____

A period (.) comes at the end of a statement or telling sentence. (I like to run.)

A question mark (?) comes at the end of a question or asking sentence. (Do you run?)

An exclamation point (!) comes at the end of a sentence to show strong feelings or emotion. (He can run fast!)

Choose the correct punctuation mark at the end of each sentence.

1. Trying new things can cause stress

2. What can give you a headache or stomachache

3. What can you do to feel less stress

4. A school counselor works in a school

5. Does your school have a counselor

6. Other people can help you too

Capitalization

Name: _____

The first word in a sentence begins with a capital letter. Proper nouns are also capitalized. Proper nouns name a specific noun such as a person's name, a city, an ocean, state or country.



Circle the capital letters.

1. April is National Stress Awareness Month in the U.S.
 2. Changes to Dylan's schedule can cause stress.
 3. Mr. Smith has an office at Main Street School.
-



Underline the letters that should be capitalized.


4. friends help cooper feel less stress.
5. the boy talked to the school counselor on monday.
6. stress may make sophie feel sad.

Time to the Hour

Name: _____

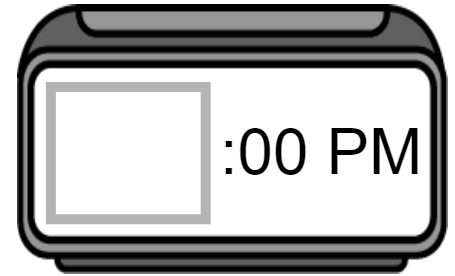
Read the question. Find the answer. Place the time on the clock.

This afternoon a school counselor talked to my class about stress. What time did the school counselor start talking about stress?




5:00

2:00

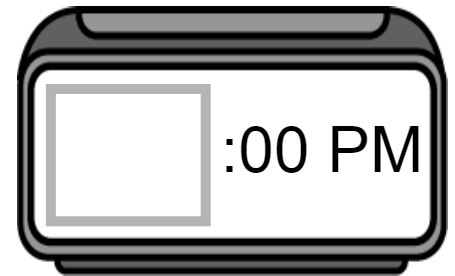


This afternoon I did homework. What time did I start doing homework?




4:00

1:00



This morning in health class, my sister learned about stress. What time did health class start?




8:00

10:00



This morning I watched an online gym class, and did exercises in my living room. What time did the online gym class start?




8:00

9:00

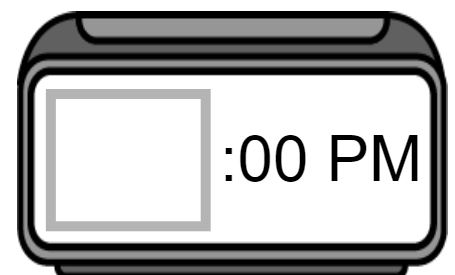


This afternoon a teenager did a puzzle to feel less stress. What time did the teenager start doing the puzzle?



3:00

4:00




Time to the Half Hour

Name: _____

Read the question. Find the answer. Place the time on the clock.

This morning my brother talked to a school counselor. What time did my brother start talking to the school counselor?




10:30

7:30

4:30



This morning my neighbor went for a run to feel less stress. What time did my neighbor start running?




11:30

9:30

8:30



This afternoon a mom helped her kids with their online school lessons. What time did she start helping her kids?




12:30

1:30

3:30



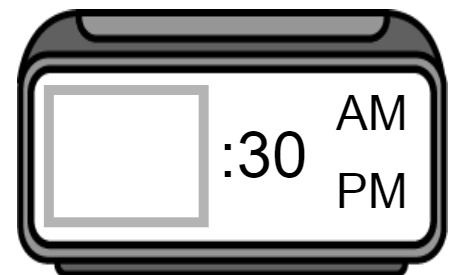
This afternoon my friend read an article about stress. What time did she finish reading the article?




6:30

4:30

5:30



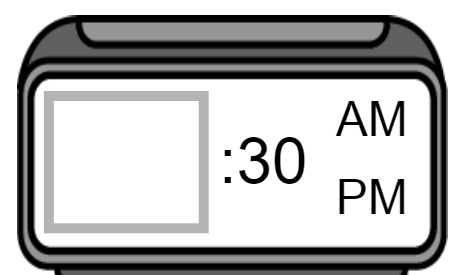
This morning my dad cooked healthy foods for breakfast. What time did he start cooking?



6:30

7:30























5:30

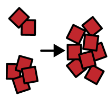


Graphing

Name: _____

- Count the number of symbols in each row. Place that number in the last column.
- Answer the questions about the graph.

teacher									
school									
test									
home									
month									
	1	2	3	4	5	6	7	8	total

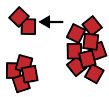


1. Which word has the most symbols?

home

teacher

test

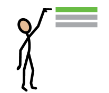
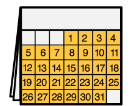


2. Which word has the fewest symbols?

teacher

school

month



3. What is the highest number?

7

6

4



4. What is the lowest number?

4

1

6



5. Do any words have the same number?

yes


no

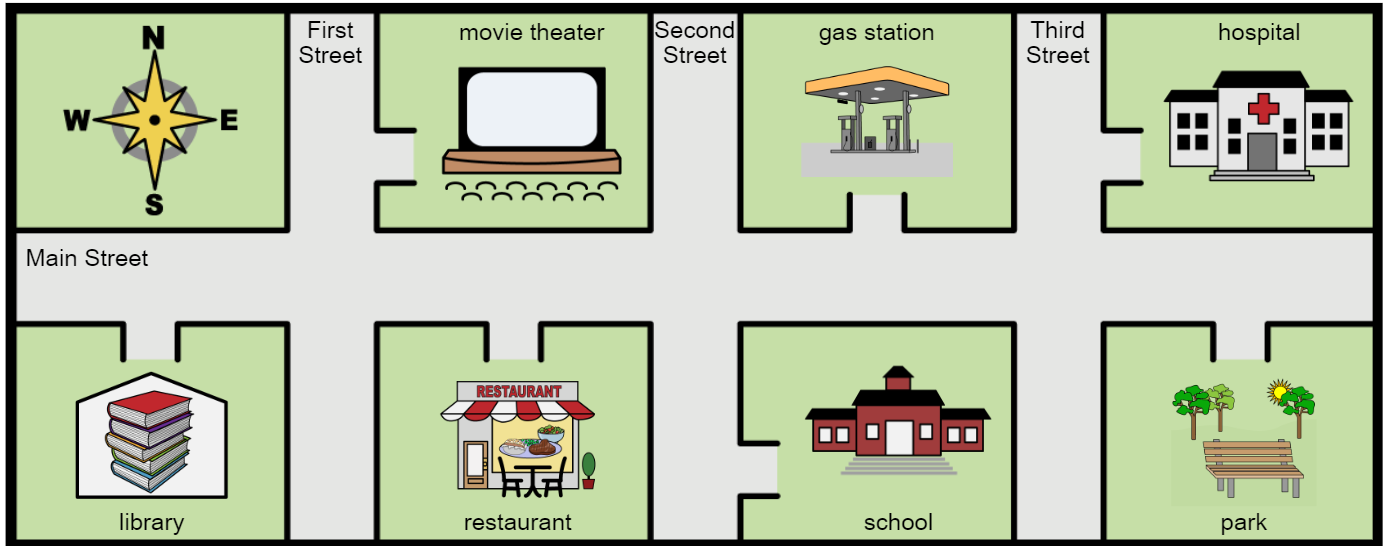


Geography

Name: _____

Use the map to answer the questions.

School 




What place is this page about?

school

gas station

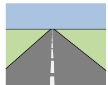
park



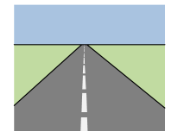
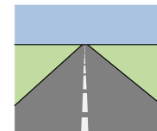
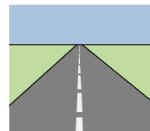
Main Street

Second Street

First Street



What street is the school on?



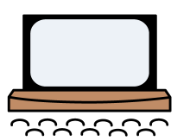
park

restaurant

movie theater



What place is east of the school?



gas station

hospital

library



What place is farthest west?

